

Compare Fractions Answers

1. Compare Fractions with Circles

1. $\frac{3}{4} > \frac{1}{2}$

2. $\frac{5}{6} > \frac{5}{9}$

3. $\frac{3}{6} = \frac{1}{2}$

4. $\frac{3}{6} < \frac{4}{6}$

5. $\frac{3}{6} > \frac{2}{6}$

6. $\frac{1}{2} > \frac{1}{3}$

7. $\frac{3}{5} = \frac{9}{15}$

8. $\frac{1}{10} < \frac{1}{8}$

9. $\frac{4}{5} < \frac{5}{6}$

10. $\frac{2}{9} < \frac{2}{7}$

2. Compare Fractions with Lines

1. $\frac{2}{3} > \frac{2}{5}$

2. $\frac{4}{7} < \frac{6}{7}$

3. $\frac{3}{8} < \frac{3}{4}$

4. $\frac{6}{8} = \frac{3}{4}$

5. $\frac{3}{5} > \frac{2}{10}$

6. $\frac{3}{4} > \frac{3}{5}$

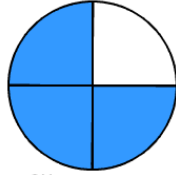
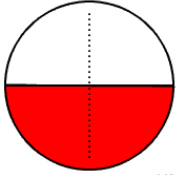
7. $\frac{1}{2} > \frac{3}{8}$

8. $\frac{1}{2} < \frac{5}{8}$

3. Compare Fractions with Circles

1.

$$\frac{2}{4}$$



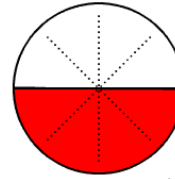
$\frac{1}{2}$ is smaller than $\frac{3}{4}$

$$\frac{1}{2} < \frac{3}{4}$$

2.

$$\frac{3}{4}$$

$$\frac{4}{8}$$

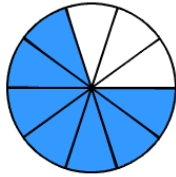
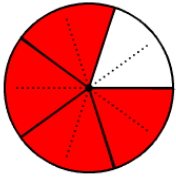


$\frac{1}{2}$ is smaller than $\frac{5}{8}$

$$\frac{1}{2} < \frac{5}{8}$$

3.

$$\frac{8}{10}$$



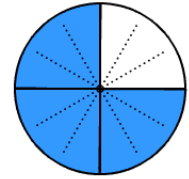
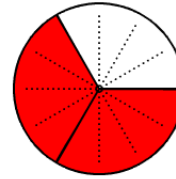
$\frac{4}{5}$ is larger than $\frac{7}{10}$

$$\frac{4}{5} > \frac{7}{10}$$

4.

$$\frac{7}{10}$$

$$\frac{8}{12}$$

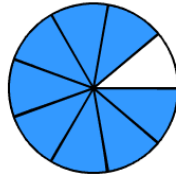
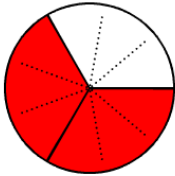


$\frac{2}{3}$ is smaller than $\frac{3}{4}$

$$\frac{2}{3} < \frac{3}{4}$$

5.

$$\frac{6}{9}$$



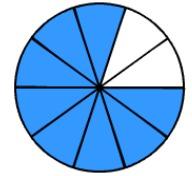
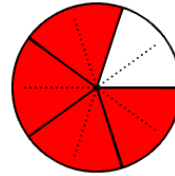
$\frac{2}{3}$ is smaller than $\frac{8}{9}$

$$\frac{2}{3} < \frac{8}{9}$$

6.

$$\frac{8}{9}$$

$$\frac{8}{10}$$



$\frac{4}{5}$ is equal to $\frac{8}{10}$

$$\frac{4}{5} = \frac{8}{10}$$

7.

$$\frac{9}{12}$$



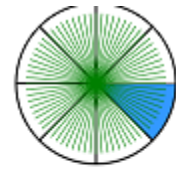
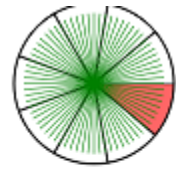
$\frac{3}{4}$ is larger than $\frac{2}{3}$

$$\frac{3}{4} > \frac{2}{3}$$

8.

$$\frac{8}{12}$$

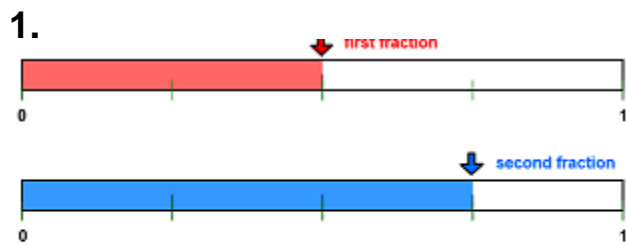
$$\frac{8}{72}$$



$\frac{1}{9}$ is smaller than $\frac{1}{8}$

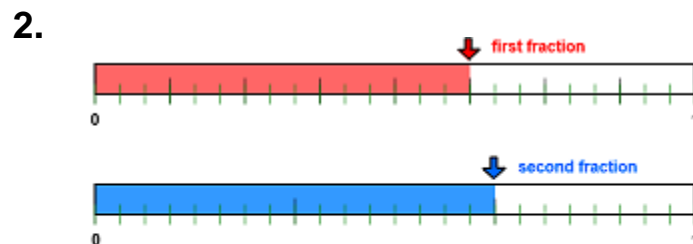
$$\frac{1}{9} < \frac{1}{8}$$

4. Compare Fractions with Lines



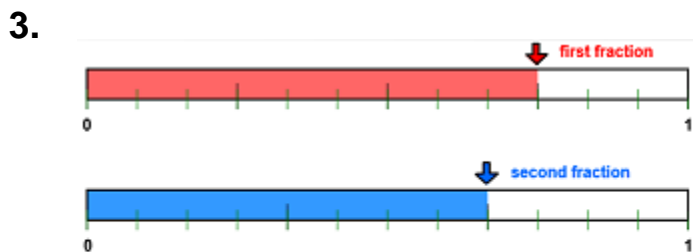
$\frac{1}{2}$ is smaller than $\frac{3}{4}$

$$\frac{1}{2} < \frac{3}{4}$$



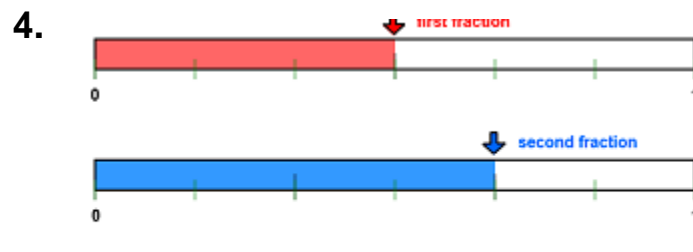
$\frac{5}{8}$ is smaller than $\frac{2}{3}$

$$\frac{5}{8} < \frac{2}{3}$$



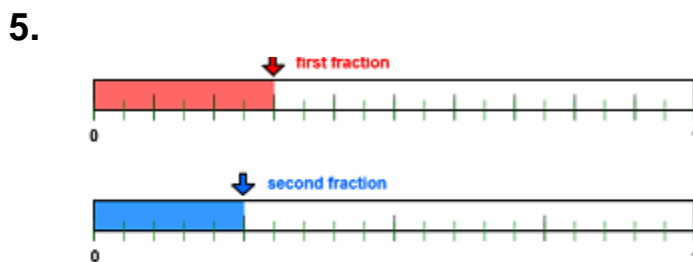
$\frac{3}{4}$ is larger than $\frac{2}{3}$

$$\frac{3}{4} > \frac{2}{3}$$



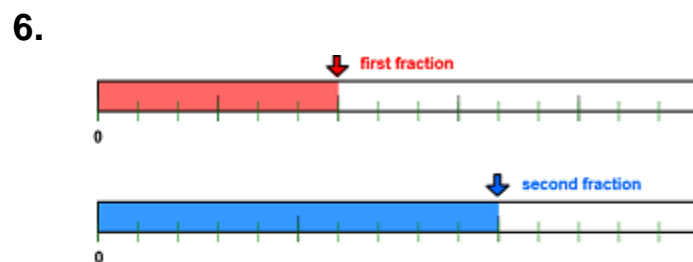
$\frac{1}{2}$ is smaller than $\frac{2}{3}$

$$\frac{1}{2} < \frac{2}{3}$$



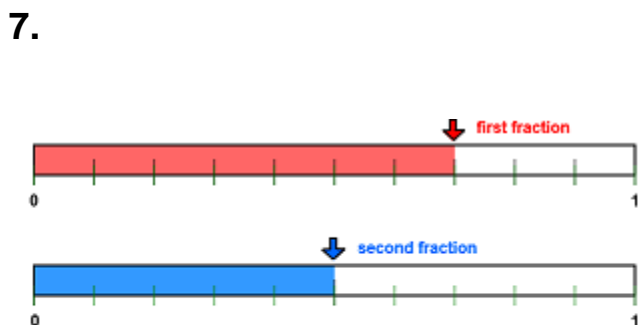
$\frac{3}{10}$ is larger than $\frac{1}{4}$

$$\frac{3}{10} > \frac{1}{4}$$



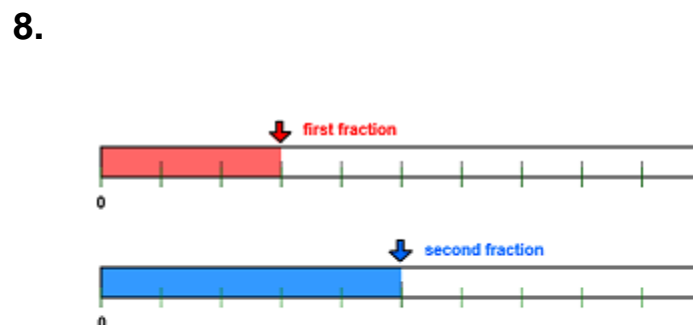
$\frac{2}{5}$ is smaller than $\frac{2}{3}$

$$\frac{2}{5} < \frac{2}{3}$$



$\frac{7}{10}$ is larger than $\frac{1}{2}$

$$\frac{7}{10} > \frac{1}{2}$$



$\frac{3}{10}$ is smaller than $\frac{1}{2}$

$$\frac{3}{10} < \frac{1}{2}$$

5. Compare Fractions with Circles

$$1. \quad \frac{9}{16} > \frac{7}{16}$$

$$3. \quad \frac{5}{16} < \frac{1}{2}$$

$$5. \quad \frac{3}{8} > \frac{1}{4}$$

$$7. \quad \frac{3}{4} = \frac{6}{8}$$

$$2. \quad \frac{9}{16} < \frac{7}{8}$$

$$4. \quad \frac{4}{16} = \frac{1}{4}$$

$$6. \quad \frac{3}{8} < \frac{1}{2}$$

$$8. \quad \frac{7}{16} < \frac{9}{16}$$

6. Compare Fractions with Lines

$$1. \quad \frac{9}{10} > \frac{11}{20}$$

$$3. \quad \frac{2}{3} < \frac{7}{8}$$

$$5. \quad \frac{8}{10} = \frac{4}{5}$$

$$7. \quad \frac{1}{5} < \frac{2}{7}$$

$$2. \quad \frac{9}{10} > \frac{4}{5}$$

$$4. \quad \frac{6}{8} = \frac{3}{4}$$

$$6. \quad \frac{7}{10} < \frac{4}{5}$$

$$8. \quad \frac{1}{3} > \frac{2}{7}$$

7. Compare Fractions with Lines and Circles

$$1. \quad \frac{1}{2} < \frac{9}{16}$$

$$3. \quad \frac{7}{8} = \frac{14}{16}$$

$$5. \quad \frac{5}{8} > \frac{9}{16}$$

$$7. \quad \frac{3}{8} < \frac{9}{16}$$

$$2. \quad \frac{7}{8} > \frac{9}{16}$$

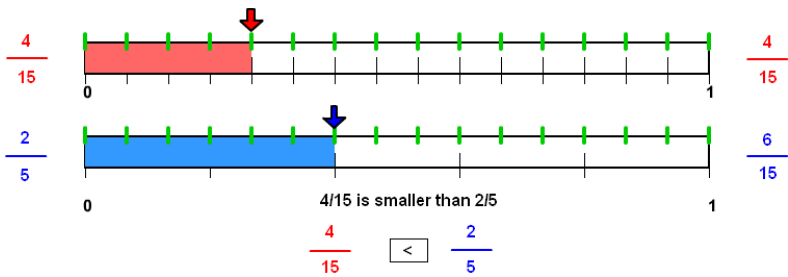
$$4. \quad \frac{2}{3} > \frac{9}{16}$$

$$6. \quad \frac{3}{8} > \frac{3}{16}$$

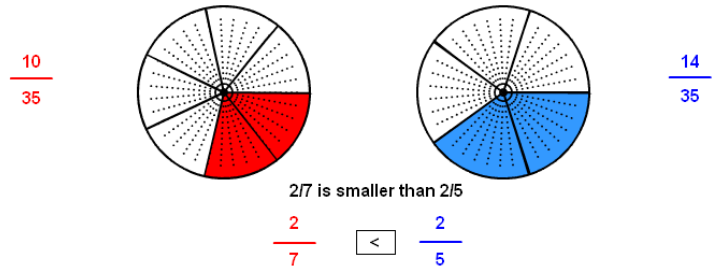
$$8. \quad \frac{5}{15} = \frac{1}{3}$$

8. Compare Fractions with Lines and Circles

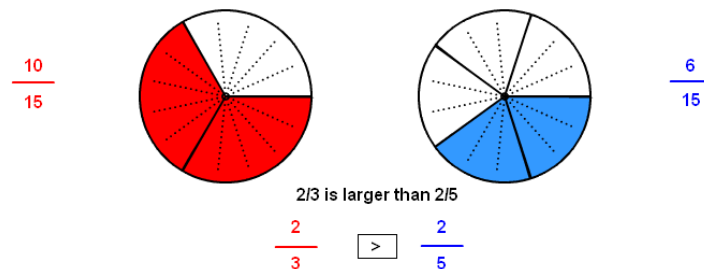
1.



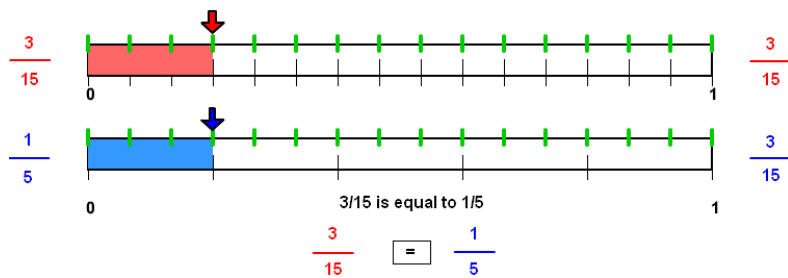
2.



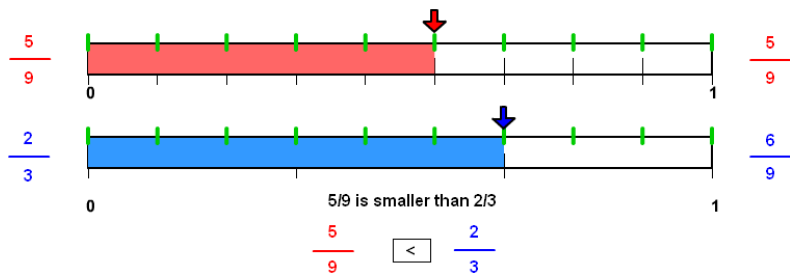
3.



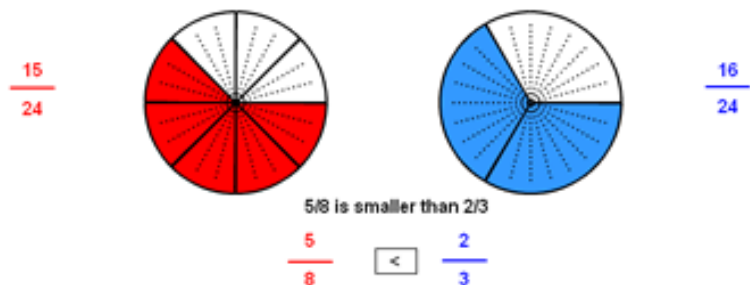
4.



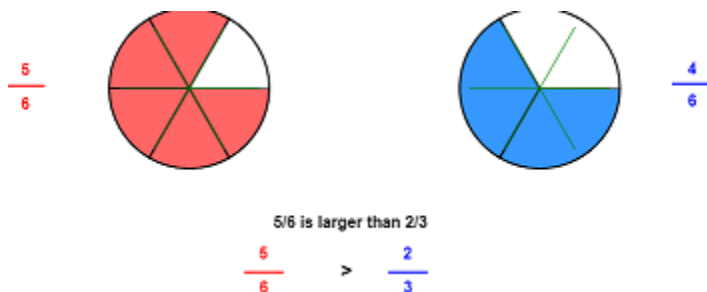
5.



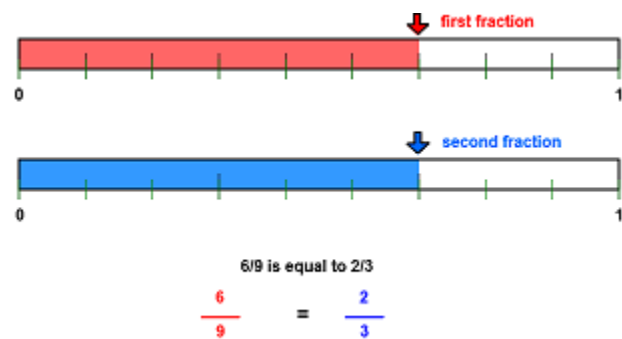
6.



7.



8.



9. Compare Fractions Practice

1. $\frac{7}{8} > \frac{5}{8}$

2. $\frac{7}{8} > \frac{7}{12}$

3. $\frac{3}{4} > \frac{5}{8}$

4. $\frac{7}{8} < \frac{11}{12}$

5. $\frac{7}{12} < \frac{11}{12}$

6. $\frac{6}{8} = \frac{3}{4}$

7. $\frac{3}{5} > \frac{1}{2}$

8. $\frac{3}{5} < \frac{3}{4}$

9. $\frac{1}{2} < \frac{5}{6}$

10. $\frac{1}{2} > \frac{3}{8}$