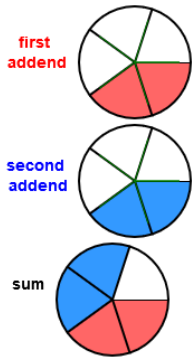


1. Add Fractions with Circles

Name _____

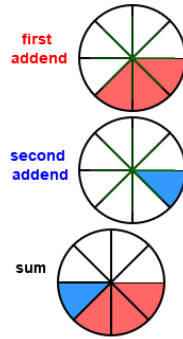
Write a number sentence that describes the picture.

1.

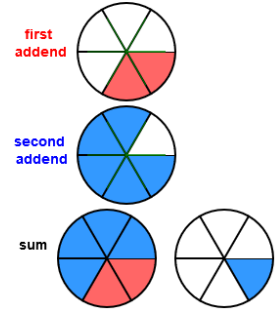


$$\frac{2}{5} + \frac{2}{5} = \frac{4}{5}$$

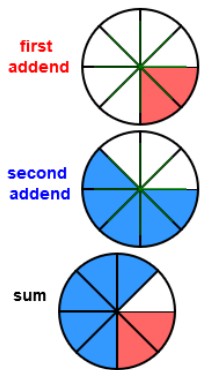
2.



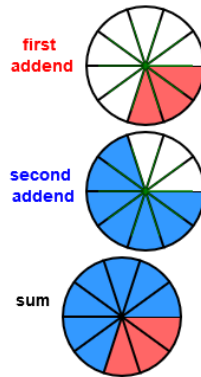
3.



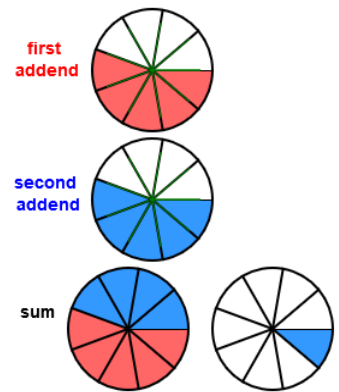
4.



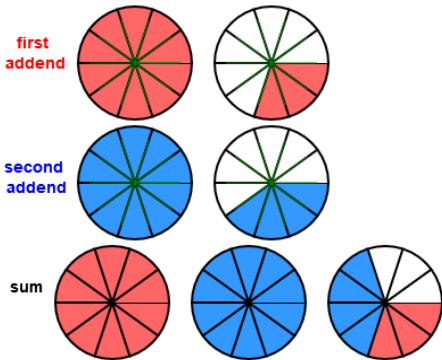
5.



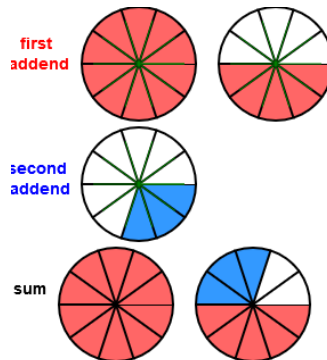
6.



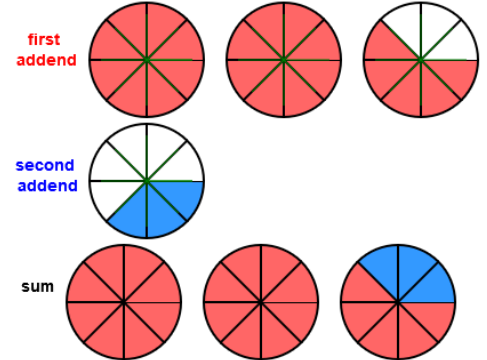
7.



8.



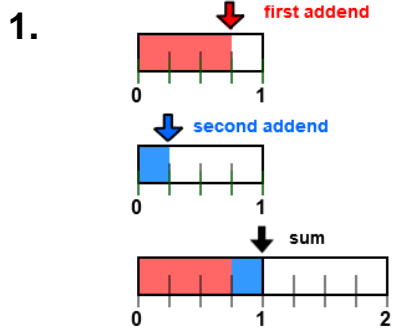
9.



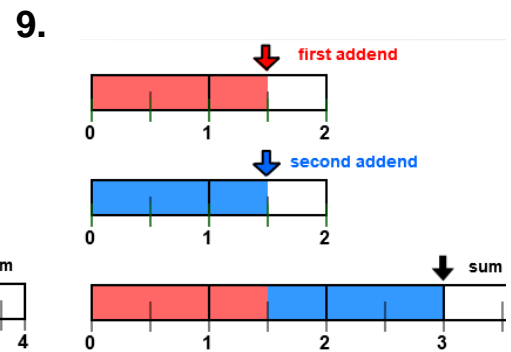
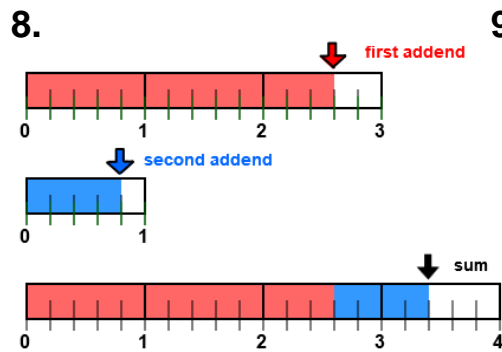
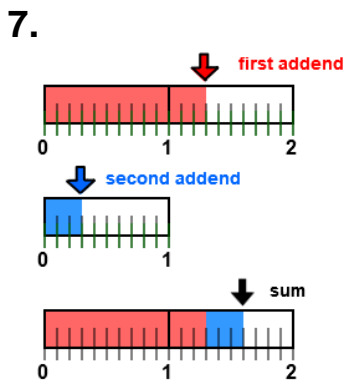
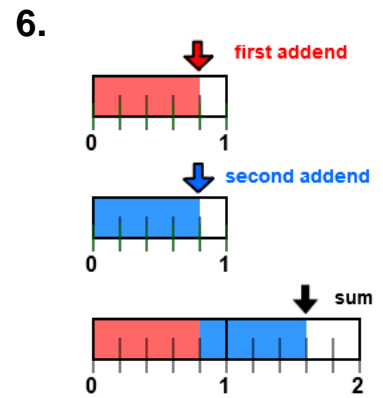
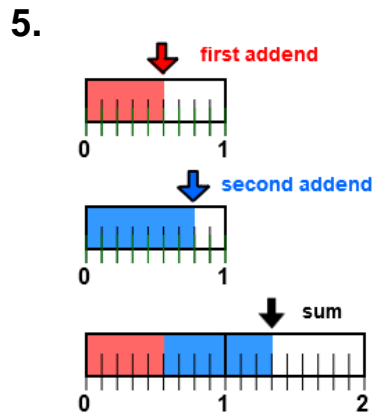
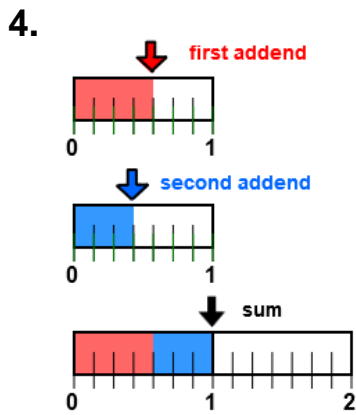
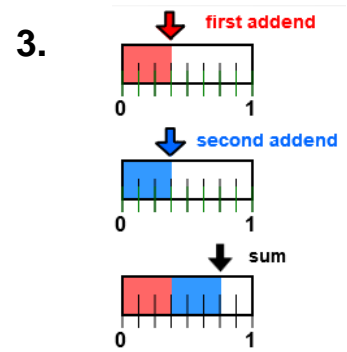
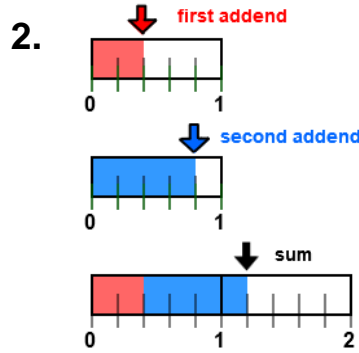
2. Add Fractions with Lines

Name _____

Write a number sentence that describes the picture.



$$\frac{3}{4} + \frac{1}{4} = 1$$

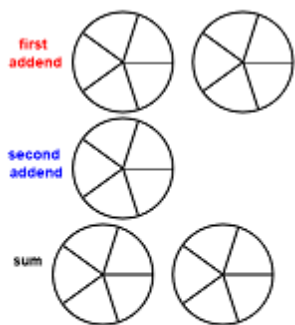


3. Add Fractions With Circles

Name _____

Color the picture to show the addends and sum and complete the number sentence that describes the picture.

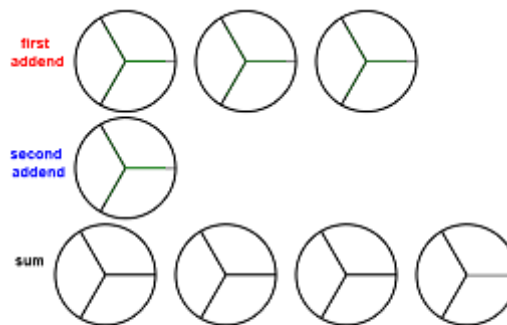
1.



$$1 \frac{2}{5} + \frac{3}{5} = 1 \frac{5}{5} = 2$$

first addend second addend

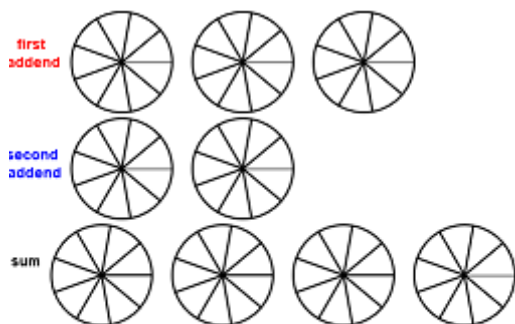
2.



$$2 \frac{2}{3} + \frac{2}{3} =$$

first addend second addend

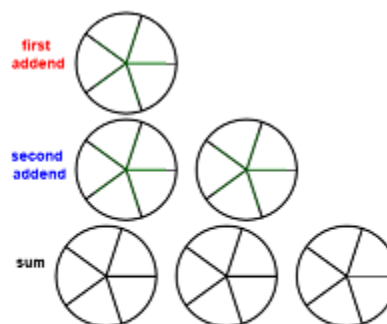
3.



$$2 \frac{4}{9} + 1 \frac{2}{9} =$$

first addend second addend

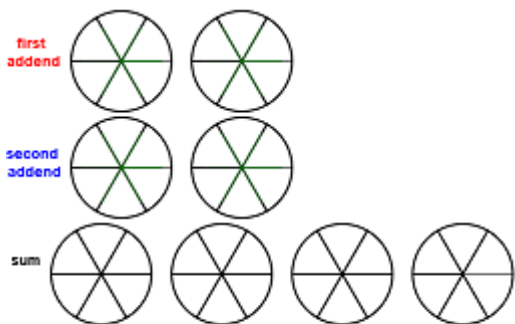
4.



$$\frac{4}{5} + 1 \frac{2}{5} =$$

first addend second addend

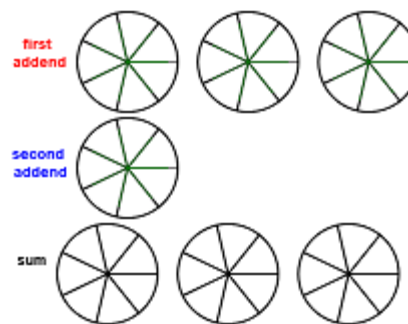
5.



$$1 \frac{5}{6} + 1 \frac{5}{6} =$$

first addend second addend

6.



$$2 \frac{1}{7} + \frac{6}{7} =$$

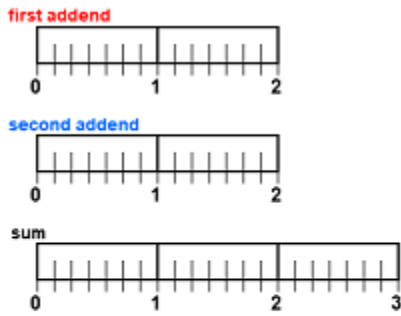
first addend second addend

4. Add Fractions with Lines

Name _____

Color the picture to show the addends and sum and complete the number sentence that describes the picture.

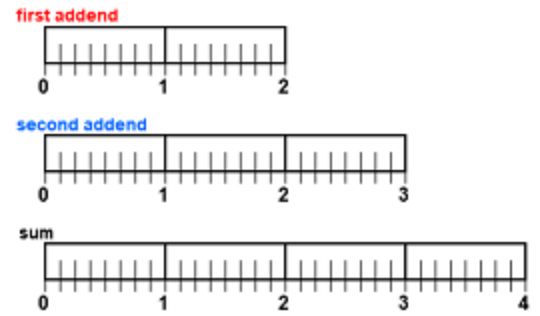
1.



$$1 \frac{2}{7} + 1 \frac{2}{7}$$

first addend second addend

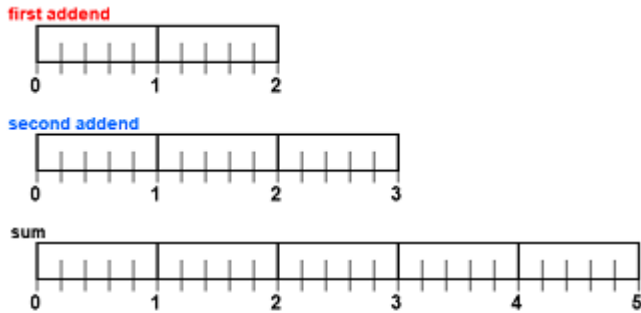
2.



$$1 \frac{1}{8} + 2 \frac{3}{8}$$

first addend second addend

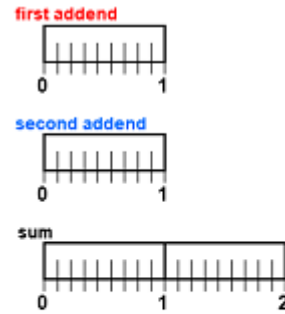
3.



$$1 \frac{2}{5} + 2 \frac{3}{5}$$

first addend second addend

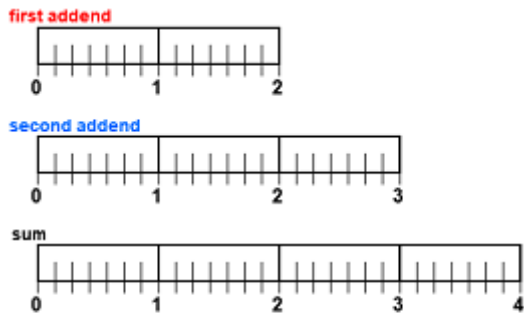
4.



$$\frac{2}{9} + \frac{8}{9}$$

first addend second addend

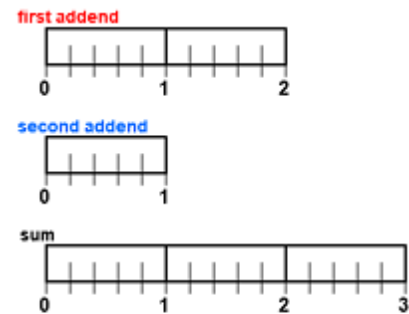
5.



$$1 \frac{2}{7} + 2 \frac{3}{7}$$

first addend second addend

6.



$$1 \frac{2}{5} + \frac{4}{5}$$

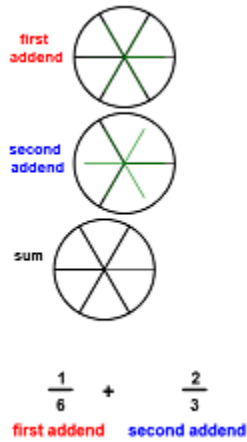
first addend second addend

5. Add Fractions with Circles

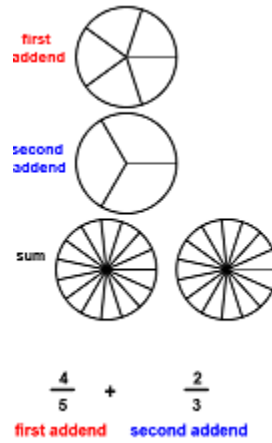
Name _____

Color the picture to show the addends and sum and complete the number sentence that describes the picture.

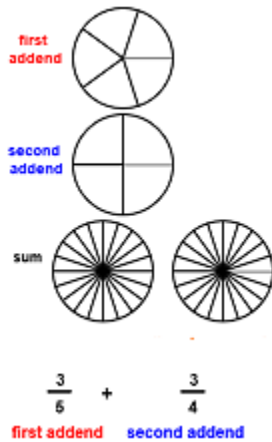
1.



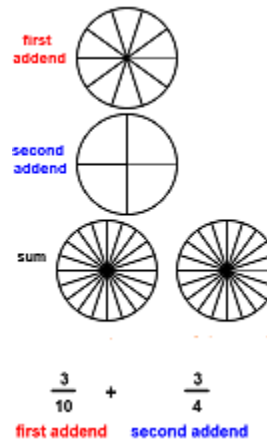
2.



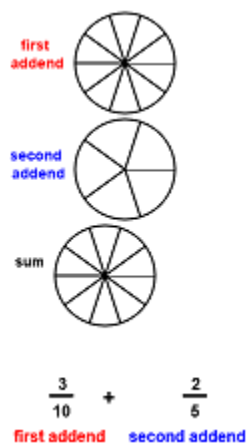
3.



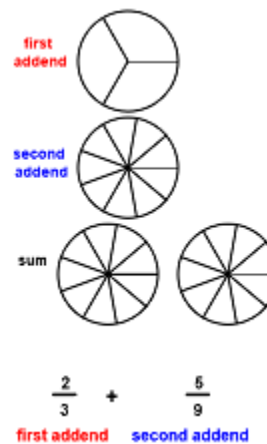
4.



5.



6.



6. Add Fractions with Lines

Name _____

Color the picture to show the addends and sum and complete the number sentence that describes the picture.

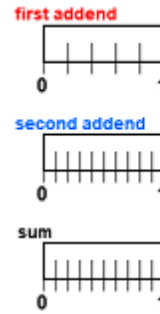
1.



$$\frac{2}{3} + \frac{1}{6}$$

first addend second addend

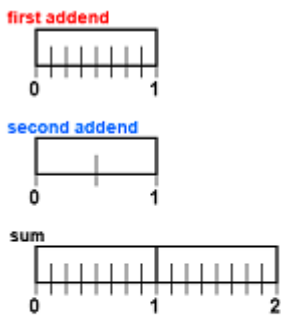
2.



$$\frac{2}{5} + \frac{1}{10}$$

first addend second addend

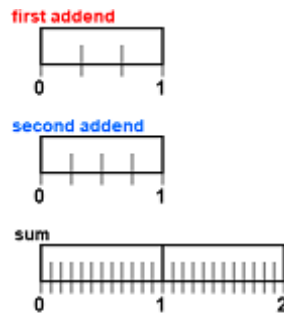
3.



$$\frac{5}{8} + \frac{1}{2}$$

first addend second addend

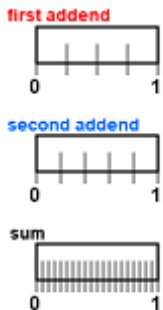
4.



$$\frac{2}{3} + \frac{3}{4}$$

first addend second addend

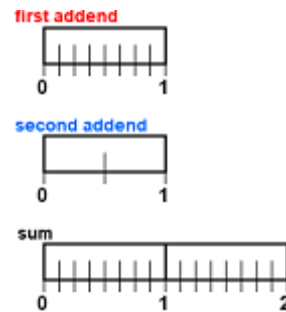
5.



$$\frac{1}{4} + \frac{3}{5}$$

first addend second addend

6.



$$\frac{7}{8} + \frac{1}{2}$$

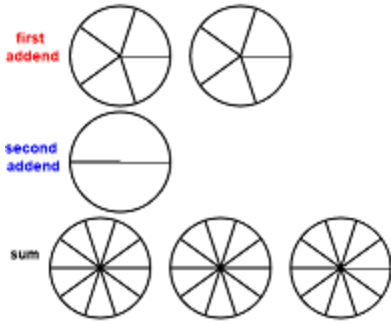
first addend second addend

7. Add Fractions with Circles and Lines

Name _____

Color the picture to show the addends and sum and complete the number sentence that describes the picture.

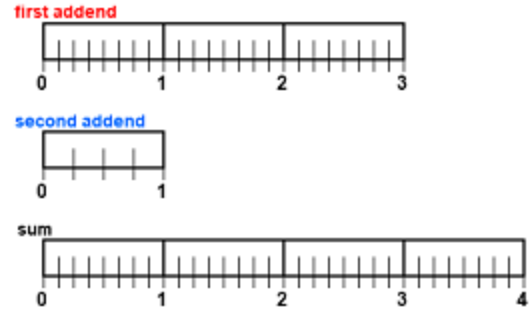
1.



$$1 \frac{3}{5} + \frac{1}{2}$$

first addend second addend

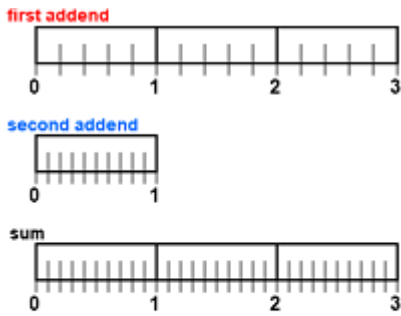
2.



$$2 \frac{3}{8} + \frac{3}{4}$$

first addend second addend

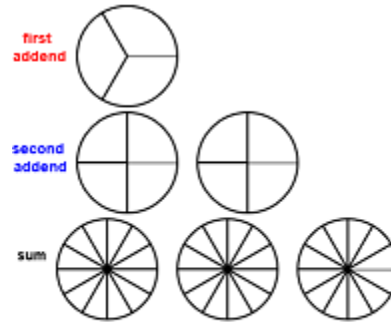
3.



$$2 \frac{3}{5} + \frac{3}{10}$$

first addend second addend

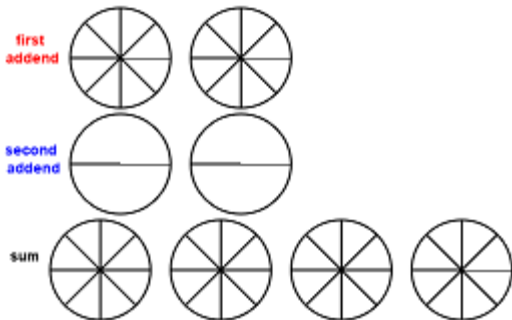
4.



$$\frac{2}{3} + 1 \frac{3}{4}$$

first addend second addend

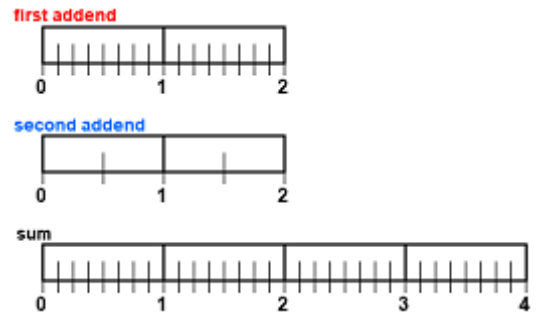
5.



$$1 \frac{5}{8} + 1 \frac{1}{2}$$

first addend second addend

6.



$$1 \frac{5}{8} + 1 \frac{1}{2}$$

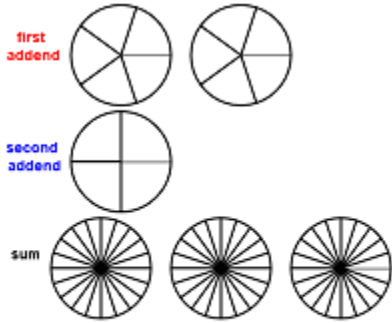
first addend second addend

8. Add Fractions with Circles and Lines

Name _____

Color the picture to show the addends and sum and complete the number sentence that describes the picture.

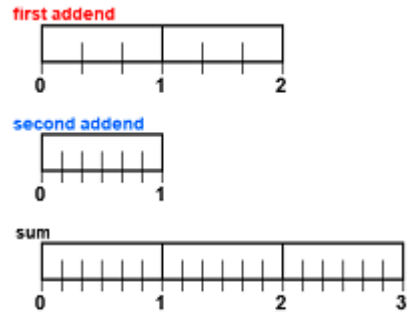
1.



$$1 \frac{3}{5} + \frac{3}{4}$$

first addend second addend

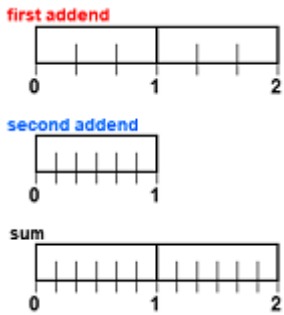
2.



$$1 \frac{1}{3} + \frac{5}{6}$$

first addend second addend

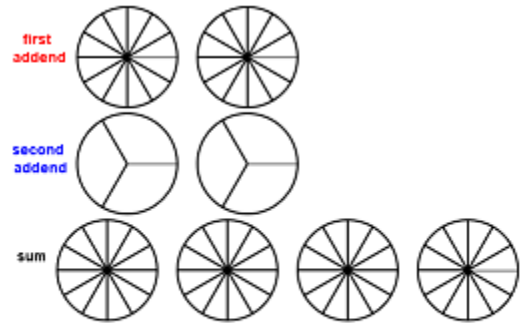
3.



$$1 \frac{2}{3} + \frac{1}{6}$$

first addend second addend

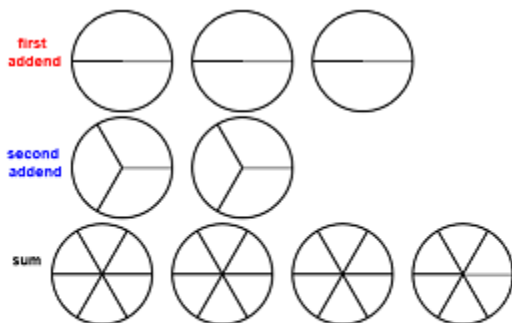
4.



$$1 \frac{5}{12} + 1 \frac{2}{3}$$

first addend second addend

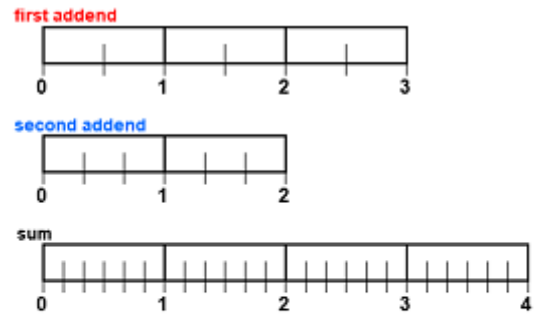
5.



$$2 \frac{1}{2} + 1 \frac{1}{3}$$

first addend second addend

6.



$$2 \frac{1}{2} + 1 \frac{1}{3}$$

first addend second addend

9. Add Fractions Practice

Name _____

Use equivalent number sentences to simplify the following:

1. $2 \frac{1}{5} + 3 \frac{2}{5} =$

2. $2 \frac{1}{5} + 1 \frac{1}{5} =$

3. $2 \frac{1}{5} + 1 \frac{4}{5} =$

4. $2 \frac{3}{4} + 2 \frac{1}{2} =$

5. $\frac{2}{3} + 3 \frac{1}{4} =$

6. $\frac{2}{7} + 2 \frac{1}{4} =$

7. $\frac{2}{7} + 2 \frac{3}{4} =$

8. $\frac{2}{7} + 2 \frac{3}{5} =$

9. $\frac{5}{7} + 2 \frac{3}{5} =$

10. $\frac{5}{6} + 2 \frac{3}{10} =$

