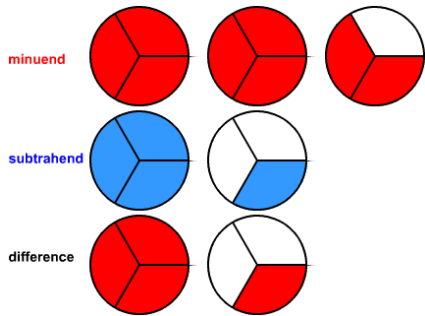


Subtract Fractions Pretest

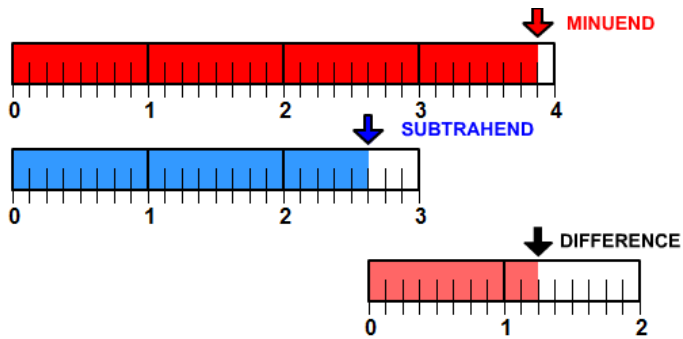
Name _____

Write a number sentence that describes each picture. The number sentence should show the minuend, subtrahend, and the difference.

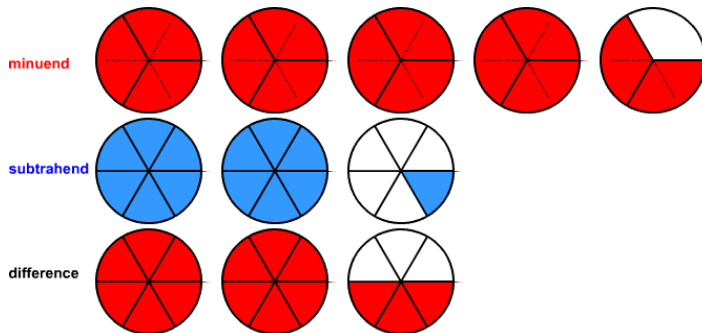
1.



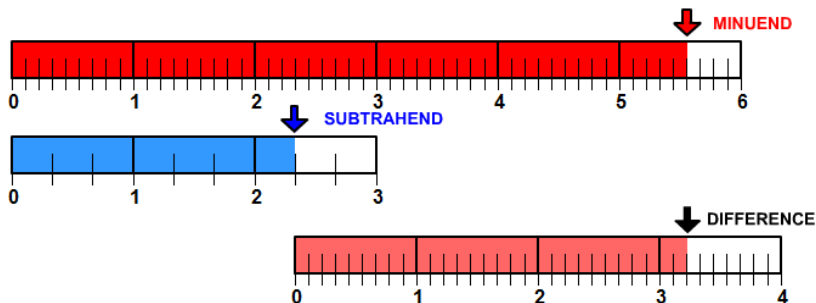
2.



3.

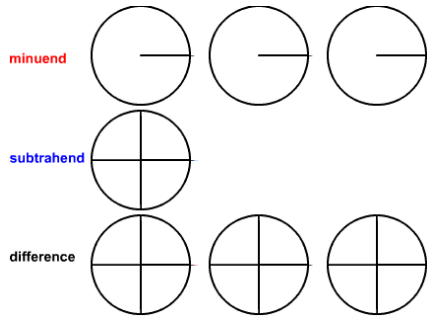


4.



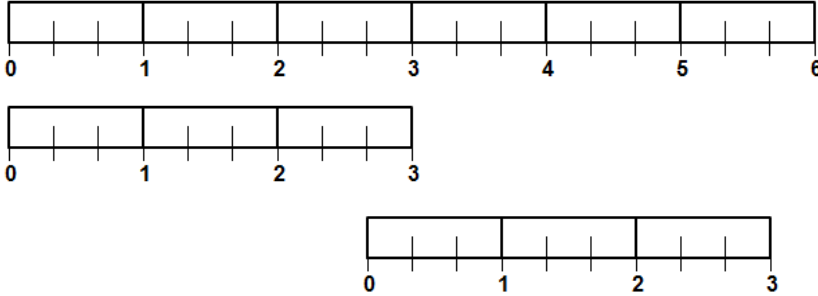
Shade the minuend, the subtrahend, and the difference. Then complete the number sentence.

5.



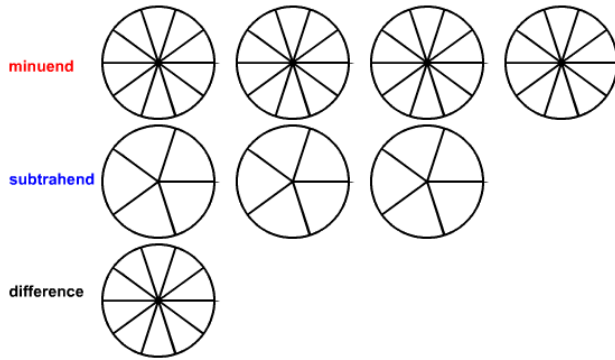
$$3 - \frac{3}{4}$$

6.



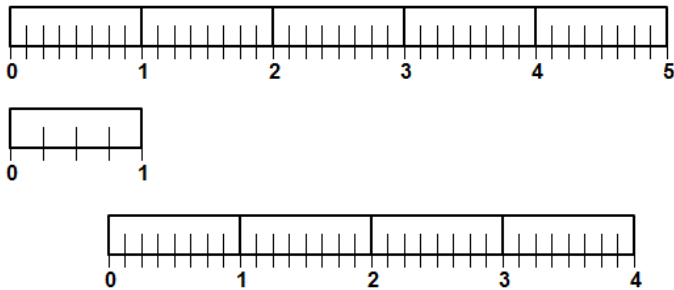
$$5 \frac{1}{3} - 2 \frac{2}{3}$$

7.



$$3 \frac{3}{10} - 2 \frac{2}{5}$$

8.



$$4 \frac{5}{8} - \frac{3}{4}$$

Complete the number sentence using the minuend and subtrahend.

9.

$$3 \frac{3}{4} - 1 \frac{3}{8}$$

10.

$$4 \frac{1}{4} - 1 \frac{7}{8}$$