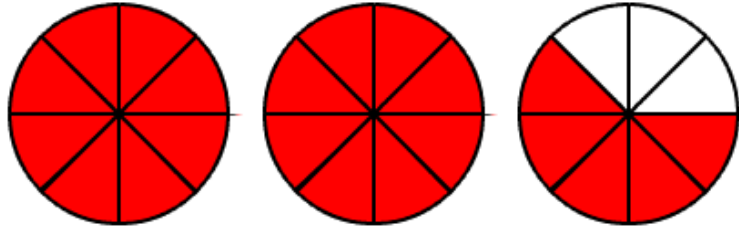


Mixed to Fraction Pretest

Name _____

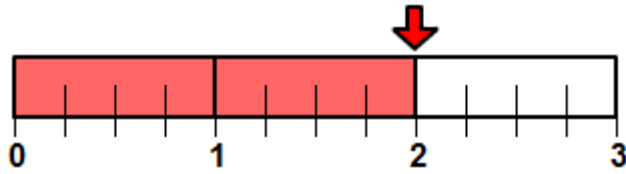
Write a number sentence that describes each pictured example.

1.



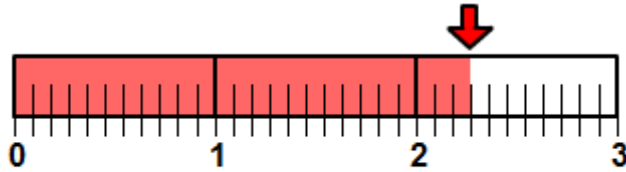
Mixed Form to Fraction Form.

2.



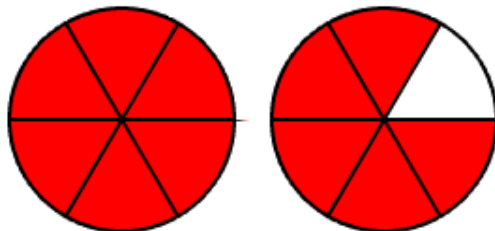
Whole Number Form to Fraction Form.

3.



Mixed Form to Fraction Form.

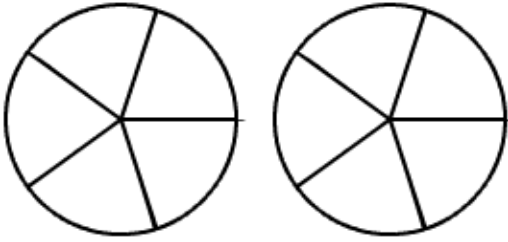
4.



Mixed Form to Fraction Form.

Shade the following and complete the number sentence.

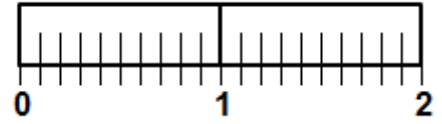
5.



Mixed Form to Fraction Form.

$$1 \frac{3}{5} =$$

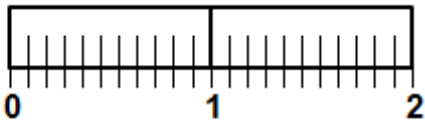
6.



Mixed Form to Fraction Form.

$$1 \frac{7}{10} =$$

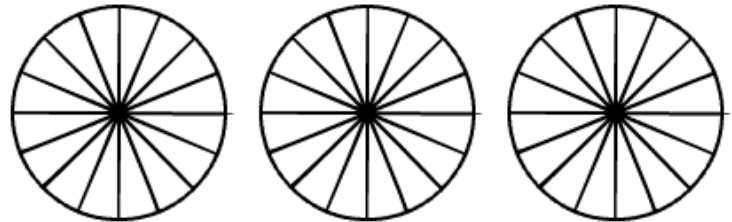
7.



Mixed Form to Fraction Form.

$$1 \frac{5}{11} =$$

8.



Mixed Form to Fraction Form.

$$2 \frac{3}{16} =$$

Complete the sentences by writing in fraction form.

9.

$$3 \frac{5}{8} =$$

10,

$$2 \frac{3}{10} =$$