

# Identify Fractions Test Answers

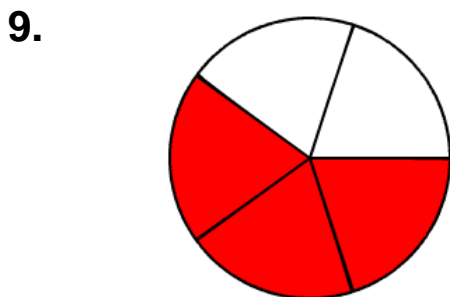
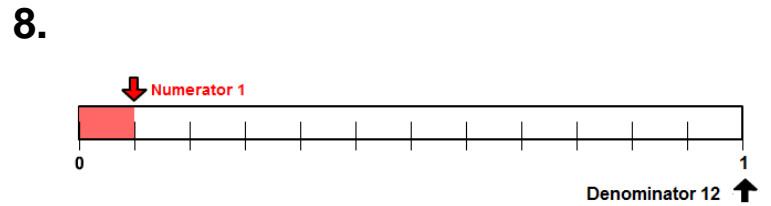
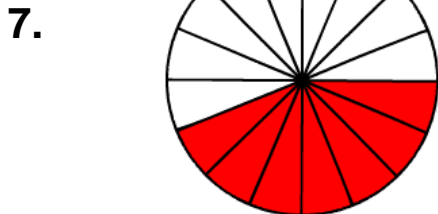
1.	7	10	7/10	seven-tenths
2.	2	7	2/7	two-sevenths
3.	3	10	3/10	three-tenths
4.	5	6	5/6	five-sixths
5.	3	7	3/7	three-sevenths
6.	3	8	3/8	three-eighths

3.  $\frac{3}{10}$

4.  $\frac{5}{6}$

5.  $\frac{3}{7}$

6.  $\frac{3}{8}$



10. 7/10 of the cookies are square.