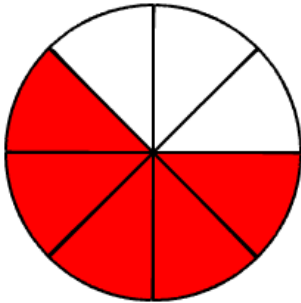


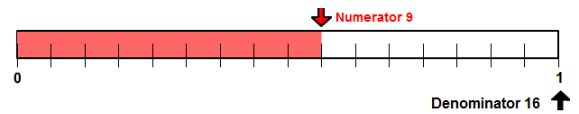
Identify Fractions Pretest Answers

1.	3	7	$3/7$	three-sevenths
2.	5	8	$5/8$	five-eighths
3.	3	4	$3/4$	three-fourths
4.	3	16	$3/16$	three-sixteenths
5.	3	5	$3/5$	three-fifths
6.	4	5	$4/5$	four-fifths

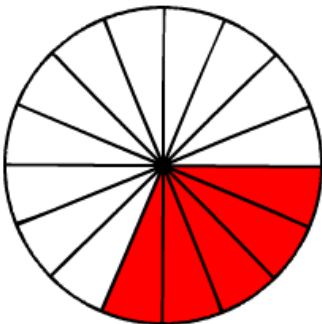
7.



8.



9.



10.

$3/7$ of the cookies are square.