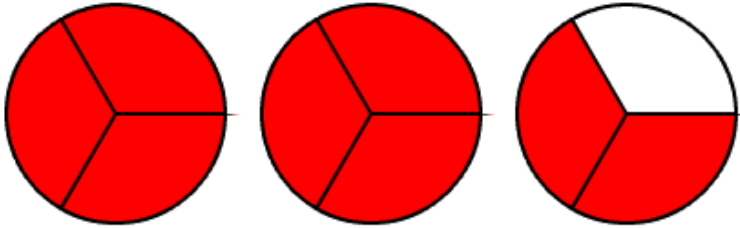


Fraction to Mixed Test

Name _____

Write the following in mixed or whole form:

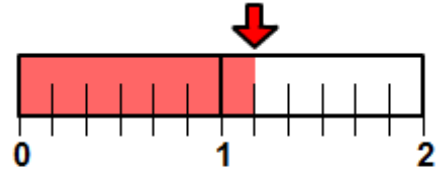
1.



Fraction Form to Mixed Form.

$$\frac{8}{3} =$$

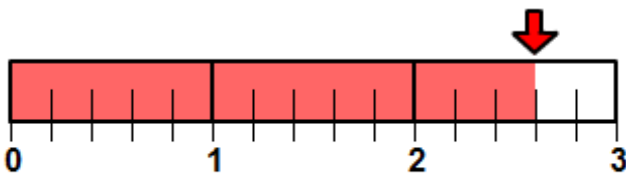
2.



Fraction Form to Mixed Form.

$$\frac{7}{6} =$$

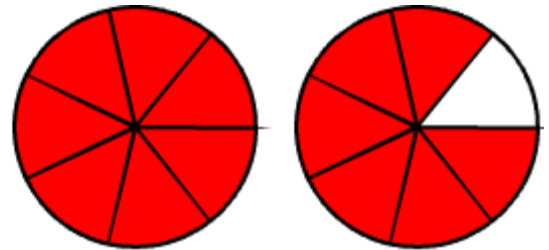
3.



Fraction Form to Mixed Form.

$$\frac{13}{5} =$$

4.

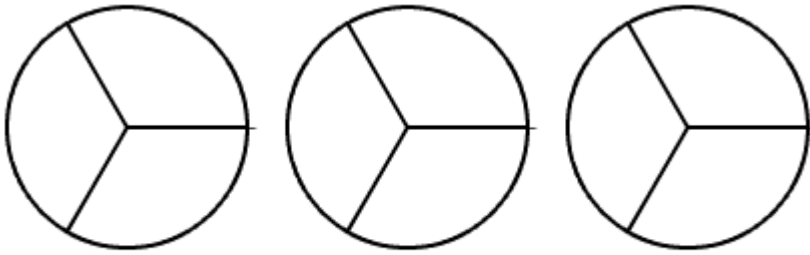


Fraction Form to Mixed Form.

$$\frac{13}{7} =$$

Shade the fraction and write in mixed or whole number form:

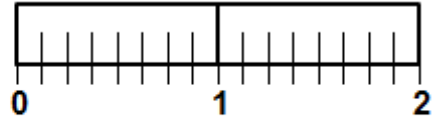
5.



Fraction Form to Mixed Form.

$$\frac{7}{3} =$$

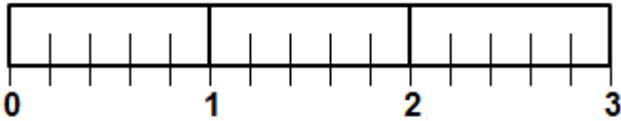
6.



Fraction Form to Mixed Form.

$$\frac{13}{8} =$$

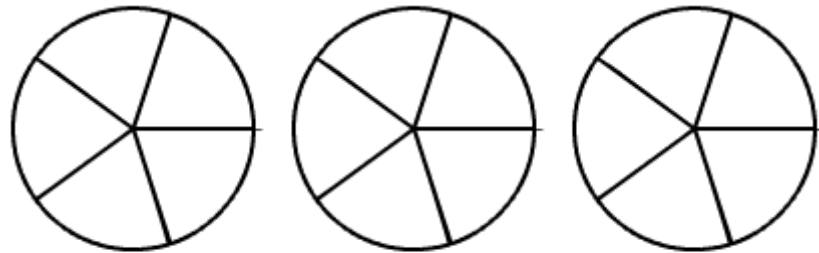
7.



Fraction Form to Mixed Form.

$$\frac{13}{5} =$$

8.



Fraction Form to Mixed Form.

$$\frac{11}{5} =$$

Complete the sentences by writing in mixed form.

9.

$$\frac{7}{2} =$$

10

$$\frac{9}{2} =$$