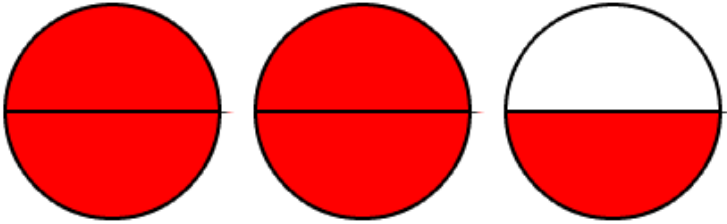


Fraction to Mixed Pretest

Name _____

Write the following in mixed or whole form:

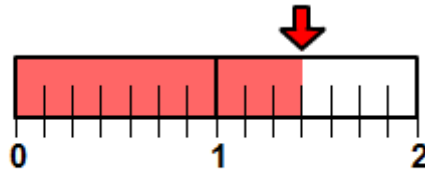
1.



Fraction Form to Mixed Form.

$$\frac{5}{2} =$$

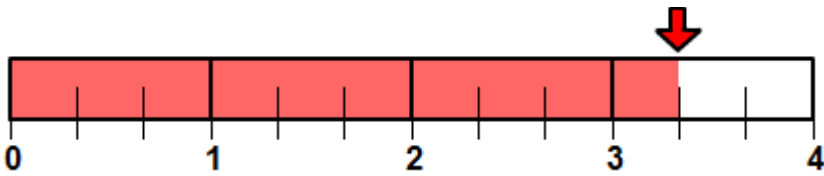
2.



Fraction Form to Mixed Form.

$$\frac{10}{7} =$$

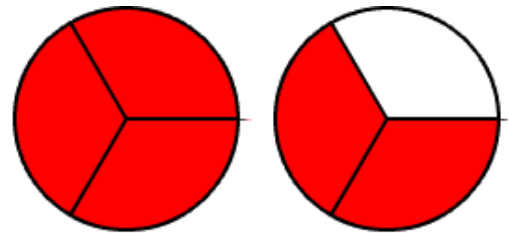
3.



Fraction Form to Mixed Form.

$$\frac{10}{3} =$$

4.

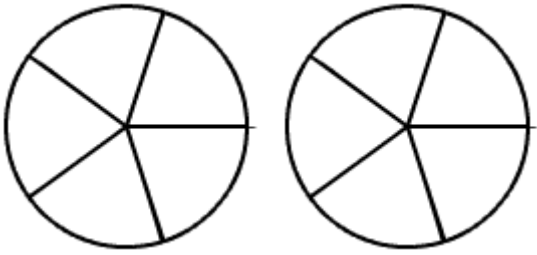


Fraction Form to Mixed Form.

$$\frac{5}{3} =$$

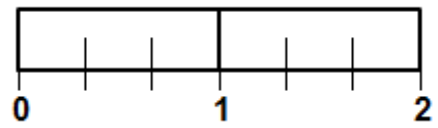
Shade the fraction and write the in mixed or whole form:

5.



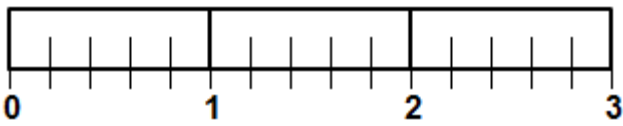
$$\frac{7}{5} =$$

6.



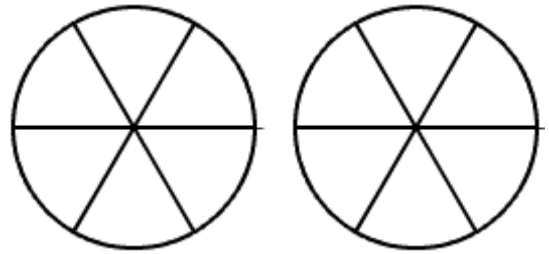
$$\frac{4}{3} =$$

7.



$$\frac{11}{5} =$$

8.



$$\frac{7}{6} =$$

Complete the sentences by writing in mixed form.

9.

$$\frac{11}{3} =$$

10,

$$\frac{9}{5} =$$