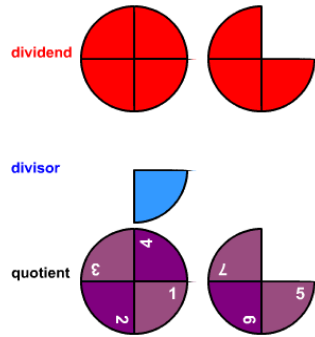


Divide Fractions Test

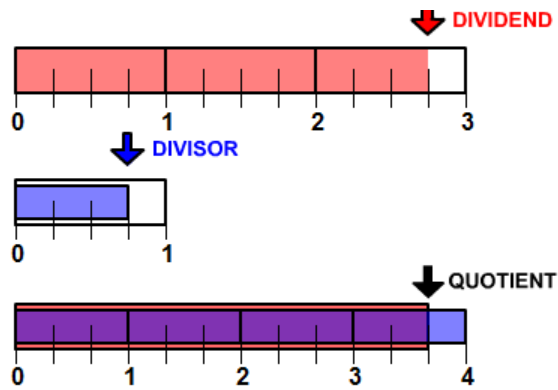
Name _____

Write a number sentence that describes each picture. The number sentence should show the dividend, the divisor and the quotient.

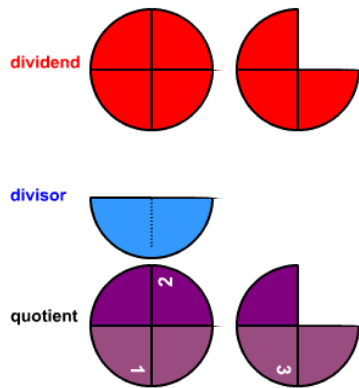
1.



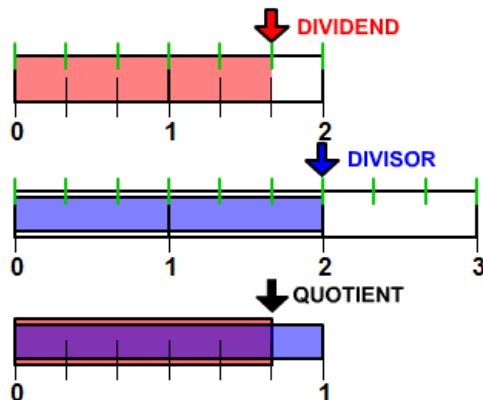
2.



3.

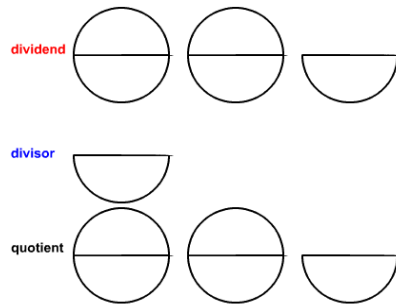


4.



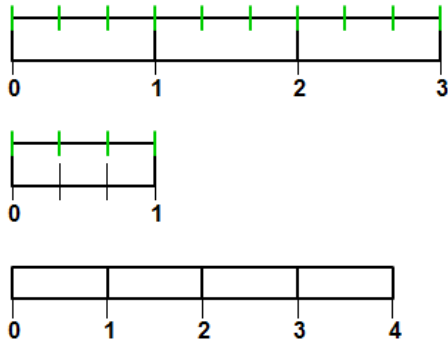
Shade the dividend, divisor, and quotient. Then complete the number sentence.

5.



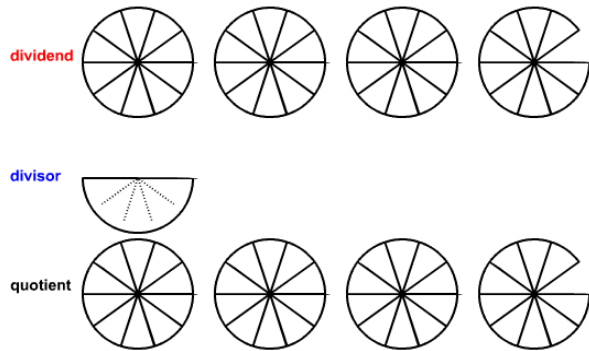
$$2 \frac{1}{2} \div \frac{1}{2} =$$

6.



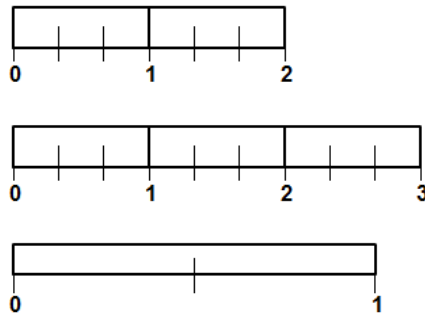
$$2 \div \frac{2}{3} =$$

7.



$$3 \frac{9}{10} \div \frac{1}{2} =$$

8.



$$1 \frac{1}{3} \div 2 \frac{2}{3} =$$

Complete the number sentence using the given dividend and divisor.

9. $4 \frac{2}{3} \div 5 =$

10. $6 \frac{3}{5} \div 6 =$