

# Compare Test Answers

Name \_\_\_\_\_

The number sentences may vary. The equation should show an equal to, less than, or greater than sign between the given numerals.

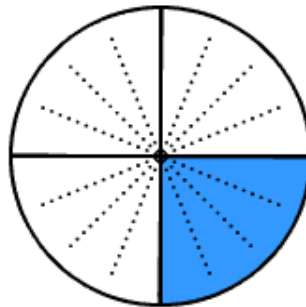
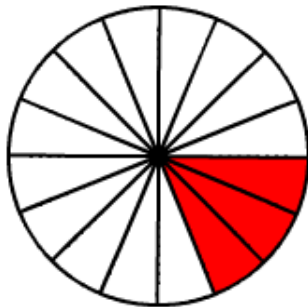
1.  $\frac{7}{9} < \frac{8}{9}$

2.  $\frac{5}{6} > \frac{5}{8}$

3.  $\frac{7}{10} > \frac{3}{5}$

4.  $\frac{3}{8} > \frac{1}{4}$

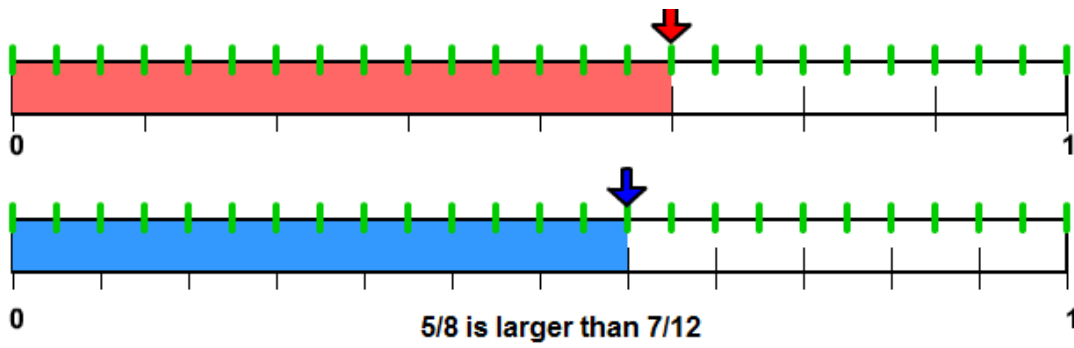
5.



3/16 is smaller than 1/4

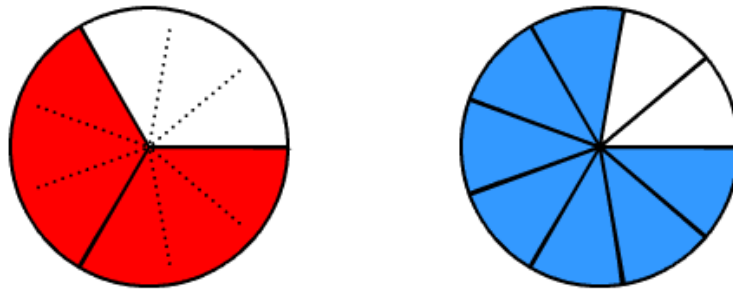
$$\frac{3}{16} < \frac{1}{4}$$

6.



$$\frac{5}{8} > \frac{7}{12}$$

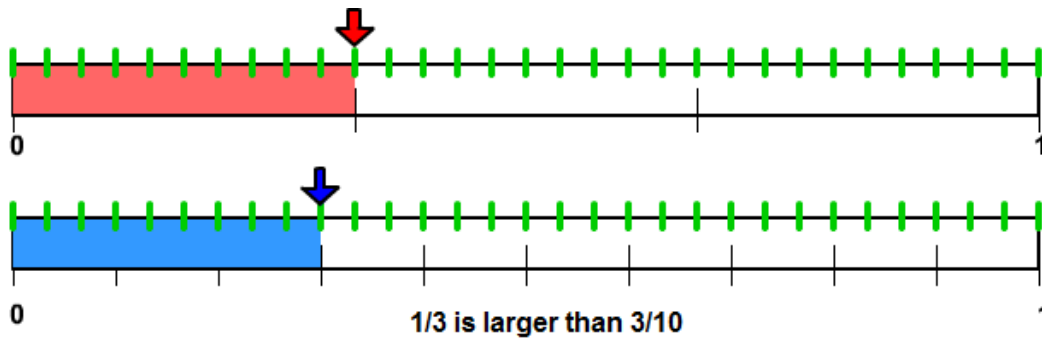
7.



2/3 is smaller than 7/9

$$\frac{2}{3} < \frac{7}{9}$$

8.



$$\frac{1}{3} > \frac{3}{10}$$

9.

$$\frac{7}{12} < \frac{2}{3}$$

10.

$$\frac{7}{20} > \frac{3}{10}$$