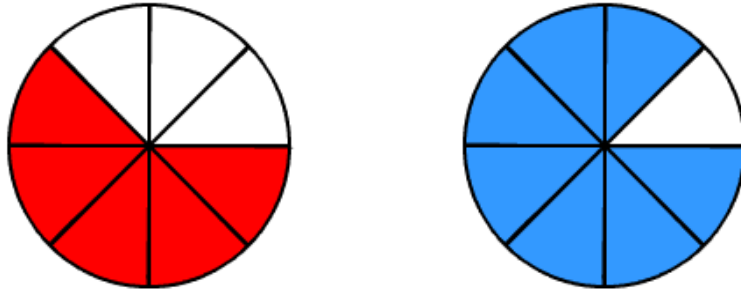


# Compare Pretest

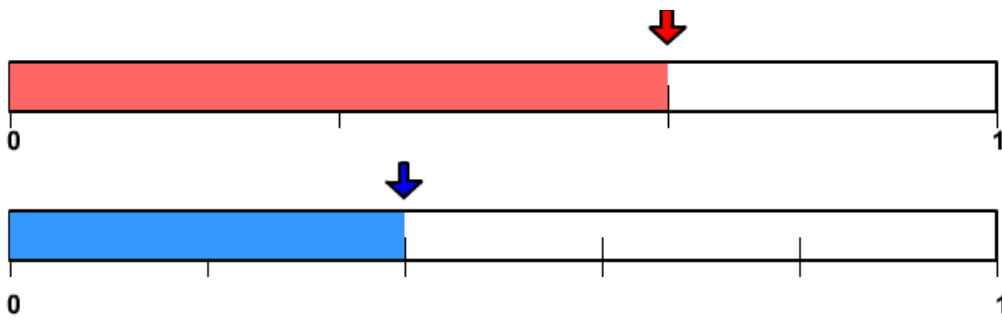
Name \_\_\_\_\_

Write a number sentence that describes each picture. Use  $<$  for less than,  $=$  for equal to, or  $>$  for greater than.

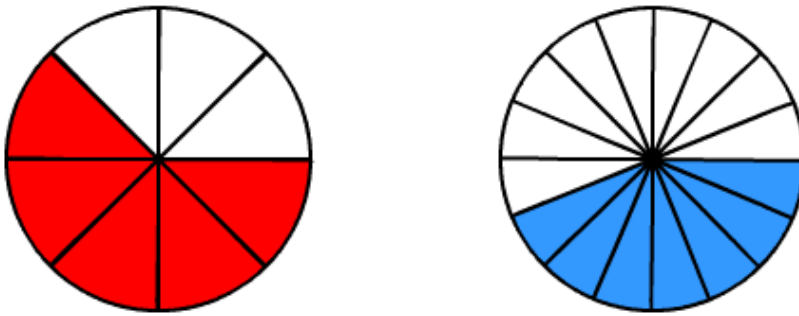
1.



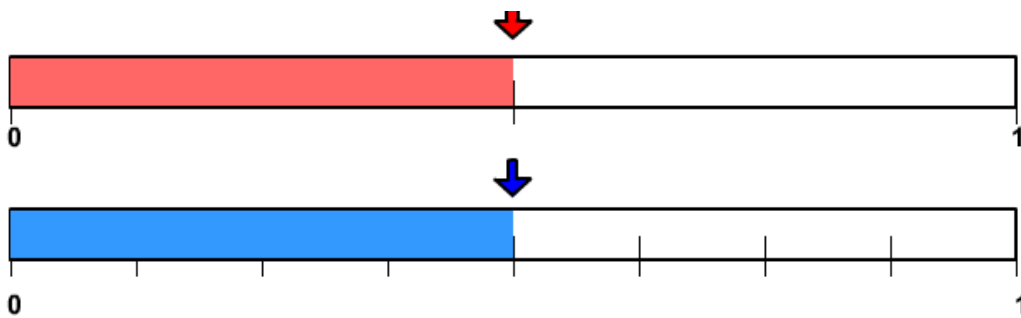
2.



3.

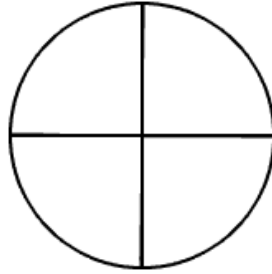
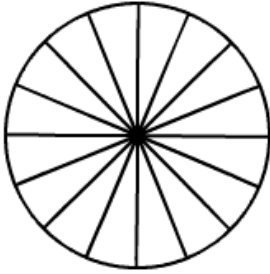


4.



Shade the following pairs of fractions and complete the number sentence using the symbols  $<$ ,  $=$ ,  $>$ .

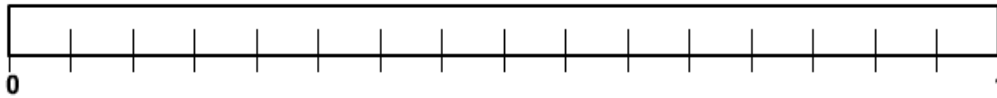
5.



$$\frac{5}{16}$$

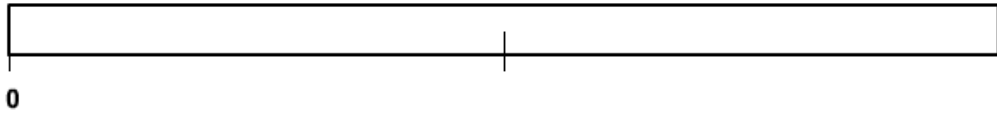
$$\frac{1}{4}$$

6.

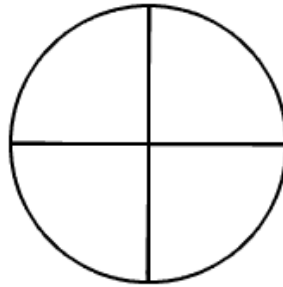
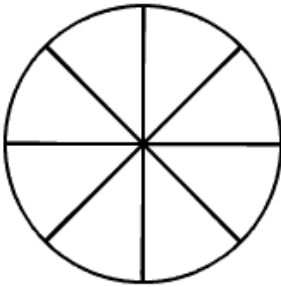


$$\frac{9}{16}$$

$$\frac{1}{2}$$



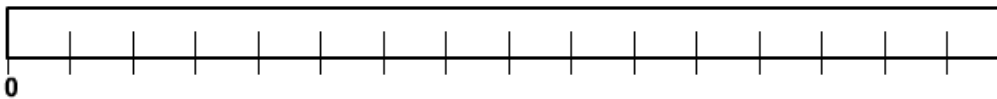
7.



$$\frac{6}{8}$$

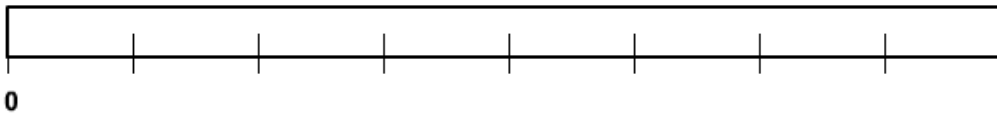
$$\frac{3}{4}$$

8.



$$\frac{5}{16}$$

$$\frac{3}{8}$$



Complete the number sentence using the symbols  $<$ ,  $=$ ,  $>$ .

9.

$$\frac{9}{10}$$

$$\frac{7}{8}$$

10.

$$\frac{11}{16}$$

$$\frac{5}{8}$$