

Compare Pretest Answers

Name _____

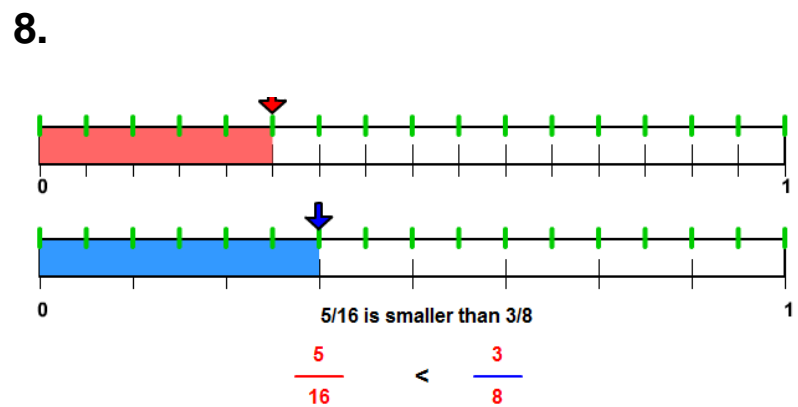

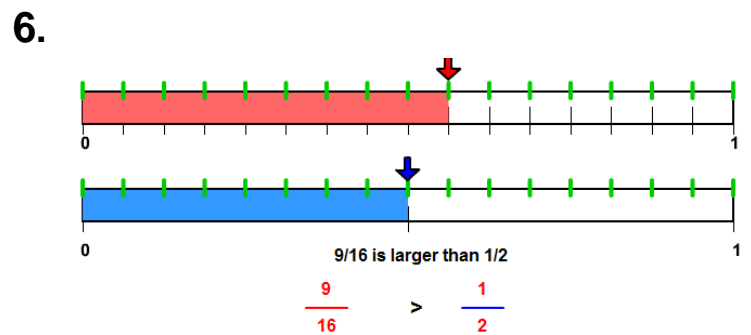
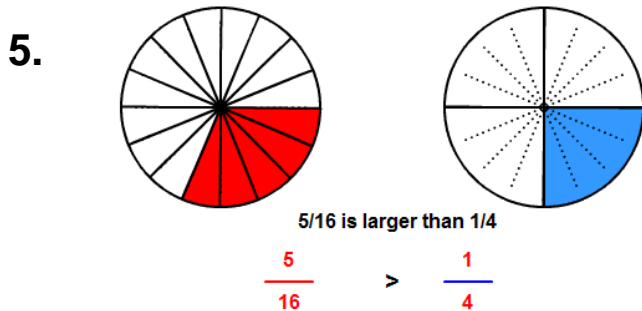
The number sentences may vary. Please write at least the original example, and an equal, less than, or greater than sign between the numerals.

1. $\frac{5}{8} < \frac{7}{8}$

2. $\frac{2}{3} > \frac{2}{5}$

3. $\frac{5}{8} > \frac{7}{16}$

4. $\frac{1}{2} = \frac{4}{8}$



9. $\frac{9}{10} > \frac{7}{8}$

10. $\frac{11}{16} > \frac{5}{8}$