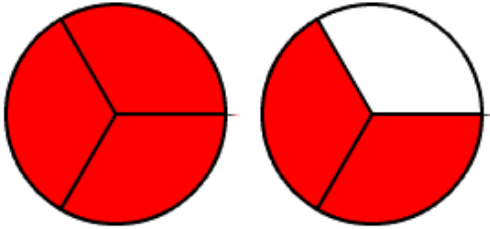


1 Rename Fraction to Mixed 1 with Circles

Name _____

Write the following in mixed or whole form:

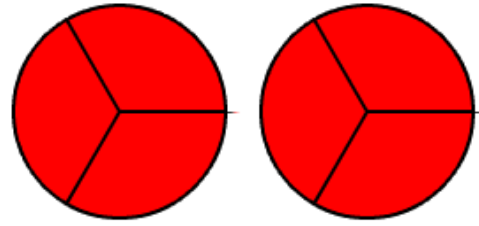
1.



Fraction Form to Mixed Form.

$$\frac{5}{3} =$$

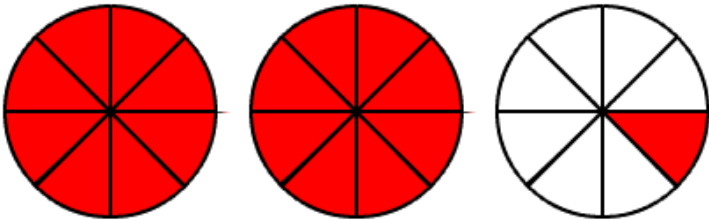
2.



Fraction Form to Whole Number.

$$\frac{6}{3} =$$

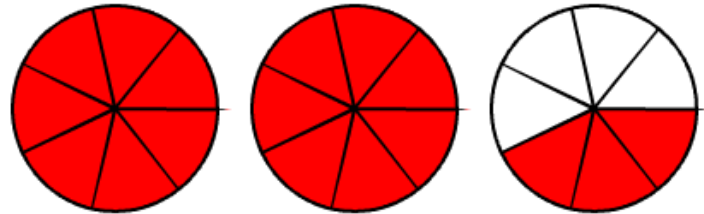
3.



Fraction Form to Mixed Form.

$$\frac{17}{8} =$$

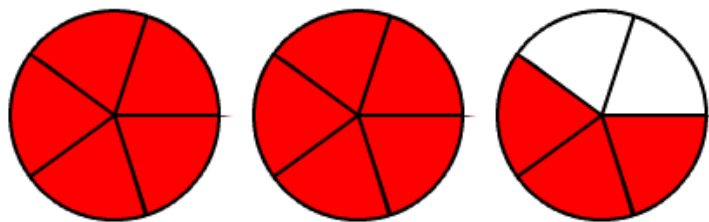
4.



Fraction Form to Mixed Form.

$$\frac{17}{7} =$$

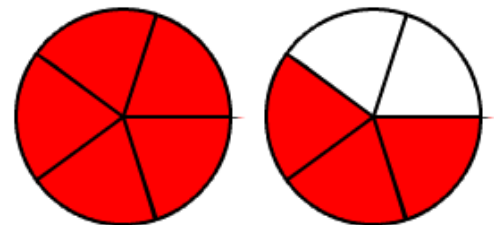
5.



Fraction Form to Mixed Form.

$$\frac{13}{5} =$$

6.



Fraction Form to Mixed Form.

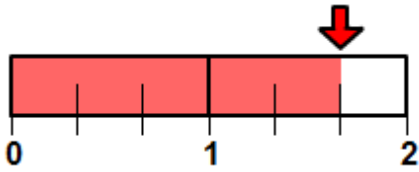
$$\frac{8}{5} =$$

2. Rename Fraction to Mixed 1 with Lines

Name _____

Write the following in mixed or whole form:

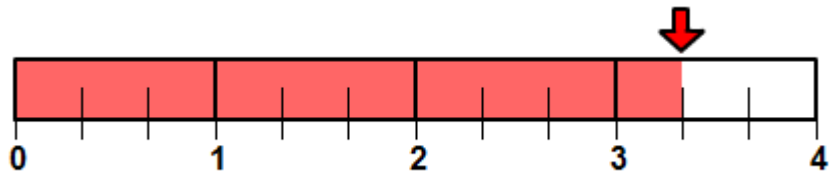
1.



Fraction Form to Mixed Form.

$$\frac{5}{3} =$$

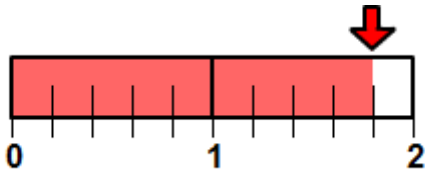
2.



Fraction Form to Mixed Form.

$$\frac{10}{3} =$$

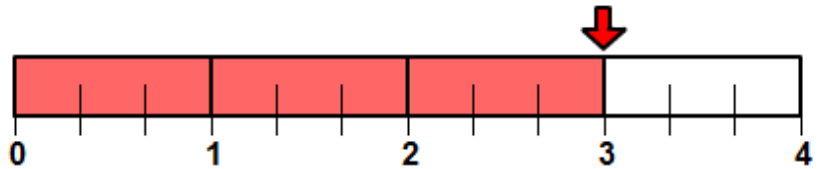
3.



Fraction Form to Mixed Form.

$$\frac{9}{5} =$$

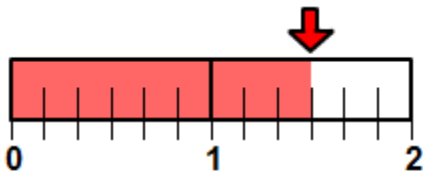
4.



Fraction Form to Whole Number.

$$\frac{9}{3} =$$

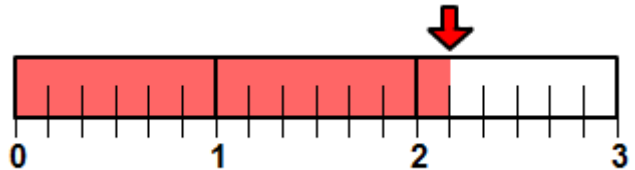
5.



Fraction Form to Mixed Form.

$$\frac{9}{6} =$$

6.



Fraction Form to Mixed Form.

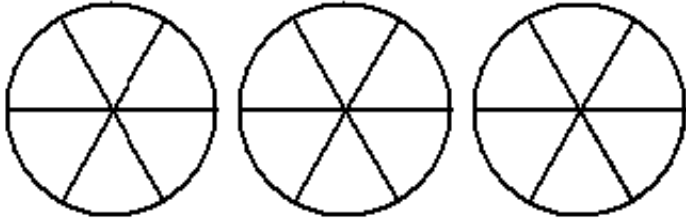
$$\frac{13}{6} =$$

3. Rename Fraction to Mixed 2 with Circles

Name _____

Shade the fraction and write the following in mixed or whole form:

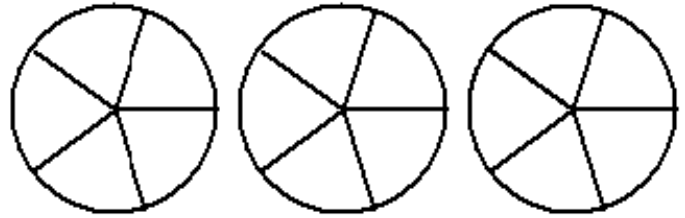
1.



Fraction Form Mixed Form

$$\frac{13}{6} =$$

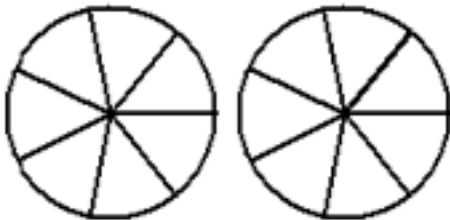
2.



Fraction Form Mixed Form

$$\frac{13}{5} =$$

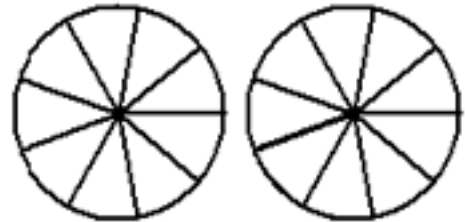
3.



Fraction Form Mixed Form

$$\frac{13}{7} =$$

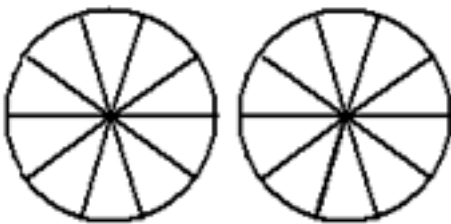
4.



Fraction Form Mixed Form

$$\frac{13}{9} =$$

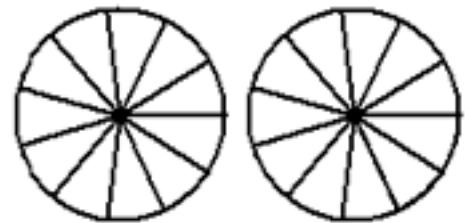
5.



Fraction Form Mixed Form

$$\frac{13}{10} =$$

6.



Fraction Form Mixed Form

$$\frac{13}{11} =$$

4. Rename Fraction to Mixed 2 with Lines

Name _____

Shade the fraction and write the following in mixed or whole form:

1.



Fraction Form Mixed Form

$$\frac{9}{8} =$$

2.



Fraction Form Mixed Form

$$\frac{9}{7} =$$

3.



Fraction Form Mixed Form

$$\frac{9}{6} =$$

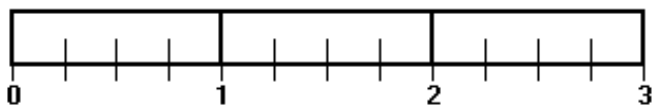
4.



Fraction Form Mixed Form

$$\frac{9}{5} =$$

5.



Fraction Form Mixed Form

$$\frac{9}{4} =$$

6.



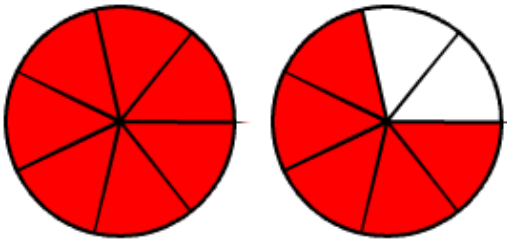
Fraction Form Whole Number

$$\frac{9}{3} =$$

5. Rename Fraction to Mixed with Lines and Circles 1 Name _____

Write the following in mixed or whole form:

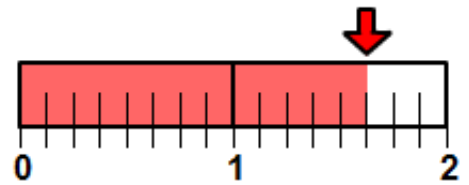
1.



Fraction Form to Mixed Form.

$$\frac{12}{7} =$$

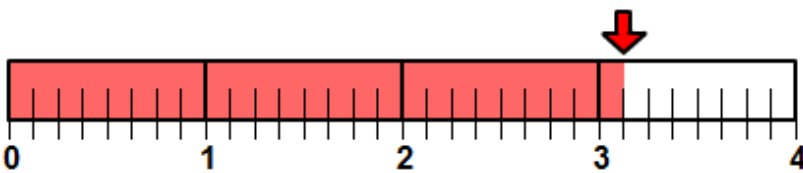
2.



Fraction Form to Mixed Form.

$$\frac{13}{8} =$$

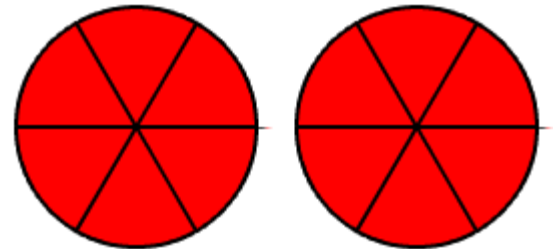
3.



Fraction Form to Mixed Form.

$$\frac{25}{8} =$$

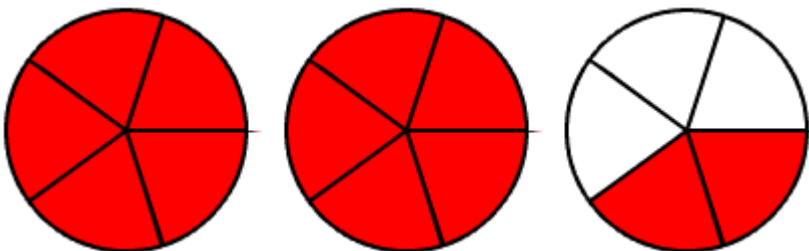
4.



Fraction Form to Whole Number.

$$\frac{12}{6} =$$

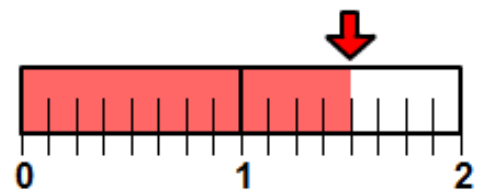
5.



Fraction Form to Mixed Form.

$$\frac{12}{5} =$$

6.



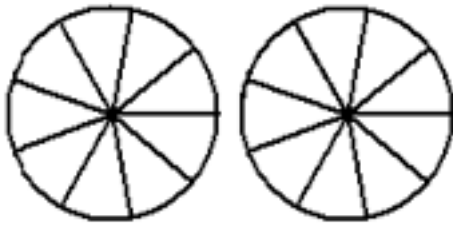
Fraction Form to Mixed Form.

$$\frac{12}{8} =$$

6. Rename Fraction to Mixed with Lines and Circles 2 Name _____

Shade the fraction and write the following in mixed or whole form:

1.

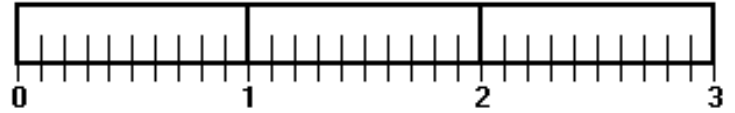


Fraction Form

Mixed Form

$$\frac{15}{9} =$$

2.



Fraction Form

Mixed Form

$$\frac{23}{10} =$$

3.

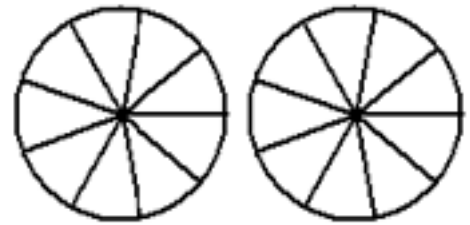


Fraction Form

Mixed Form

$$\frac{15}{10} =$$

4.

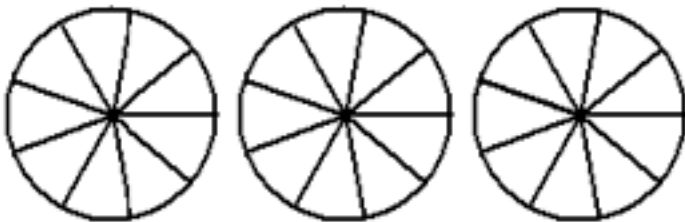


Fraction Form

Whole Number

$$\frac{18}{9} =$$

5.

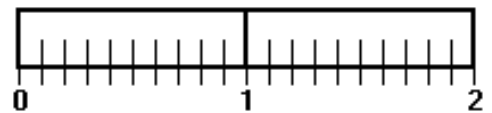


Fraction Form

Mixed Form

$$\frac{23}{9} =$$

6.



Fraction Form

Mixed Form

$$\frac{14}{10} =$$

7. Rename Fraction to Mixed Practice

Write the following in mixed or whole form:

Name _____

1.

Fraction Form	Mixed Form
$\frac{9}{8} =$	

2.

Fraction Form	Mixed Form
$\frac{10}{3} =$	

3.

Fraction Form	Whole Number
$\frac{9}{3} =$	

4.

Fraction Form	Mixed Form
$\frac{9}{5} =$	

5.

Fraction Form	Mixed Form
$\frac{16}{5} =$	

6.

Fraction Form	Mixed Form
$\frac{8}{5} =$	

7.

Fraction Form	Mixed Form
$\frac{4}{3} =$	

8.

Fraction Form	Mixed Form
$\frac{14}{3} =$	

9.

Fraction Form	Mixed Form
$\frac{14}{5} =$	

10.

Fraction Form	Whole Number
$\frac{14}{7} =$	

11.

Fraction Form	Mixed Form
$\frac{14}{9} =$	

12.

Fraction Form	Mixed Form
$\frac{14}{13} =$	

13.

Fraction Form	Mixed Form
$\frac{9}{6} =$	

14.

Fraction Form	Mixed Form
$\frac{17}{5} =$	