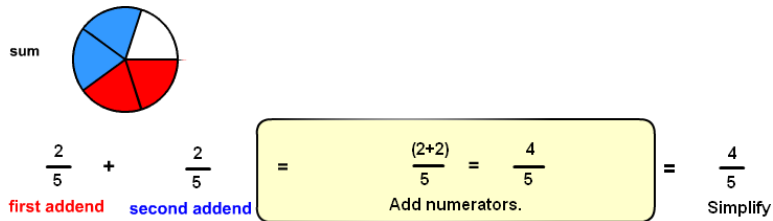


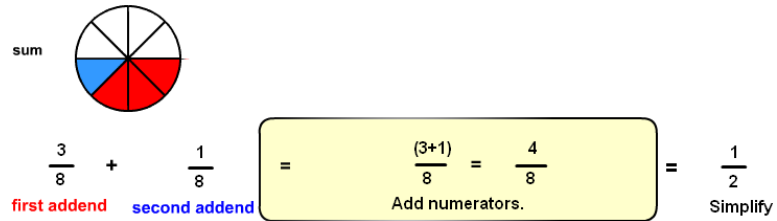
Add Fractions Answers

1. Add Fractions 1 with Circles

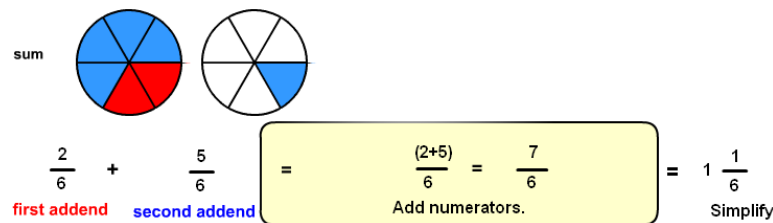
1.



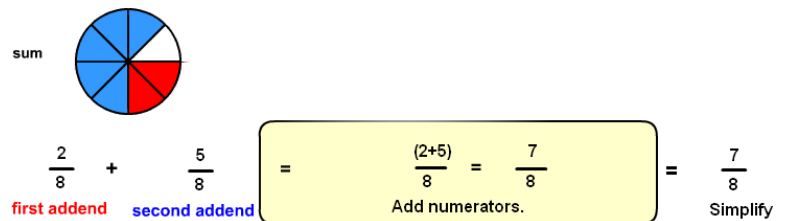
2.



3.

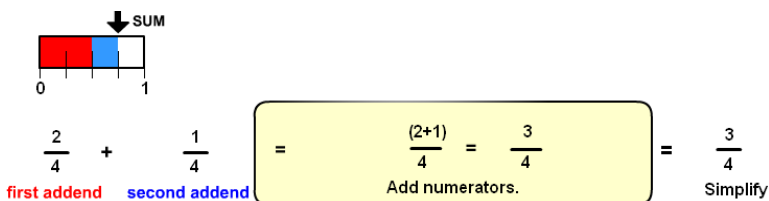


4.

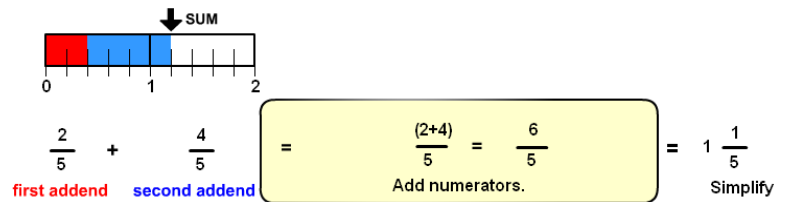


2. Add Fractions 1 with Lines

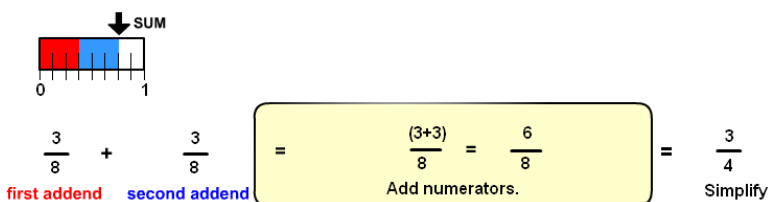
1.



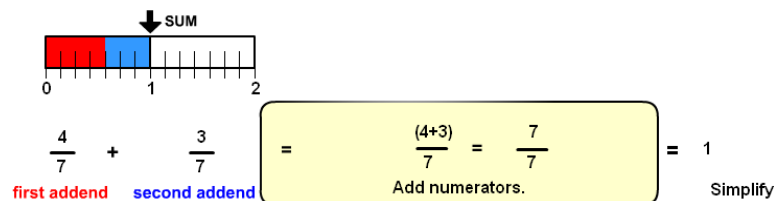
2.



3.



4.



3. Add Fractions 2 with Circles

1.

2.

sum

$$1 \frac{2}{5} + \frac{3}{5} = (1+0) \frac{(2+3)}{5} = 1 \frac{5}{5} = 2$$

first addend second addend Add whole numbers and numerators. Simplify

sum

$$2 \frac{2}{3} + \frac{2}{3} = (2+0) \frac{(2+2)}{3} = 2 \frac{4}{3} = 3 \frac{1}{3}$$

first addend second addend Add whole numbers and numerators. Simplify

3.

4.

sum

$$2 \frac{4}{9} + 1 \frac{2}{9} = (2+1) \frac{(4+2)}{9} = 3 \frac{6}{9} = 3 \frac{2}{3}$$

first addend second addend Add whole numbers and numerators. Simplify

sum

$$\frac{4}{5} + 1 \frac{2}{5} = (0+1) \frac{(4+2)}{5} = 1 \frac{6}{5} = 2 \frac{1}{5}$$

first addend second addend Add whole numbers and numerators. Simplify

4. Add Fractions 2 with Lines

1.

2.

sum

$$1 \frac{2}{7} + 1 \frac{2}{7} = (1+1) \frac{(2+2)}{7} = 2 \frac{4}{7}$$

first addend second addend Add whole numbers and numerators. Simplify

sum

$$1 \frac{2}{10} + \frac{9}{10} = (1+0) \frac{(2+9)}{10} = 1 \frac{11}{10} = 2 \frac{1}{10}$$

first addend second addend Add whole numbers and numerators. Simplify

3.

4.

sum

$$1 \frac{1}{8} + 2 \frac{3}{8} = (1+2) \frac{(1+3)}{8} = 3 \frac{4}{8} = 3 \frac{1}{2}$$

first addend second addend Add whole numbers and numerators. Simplify

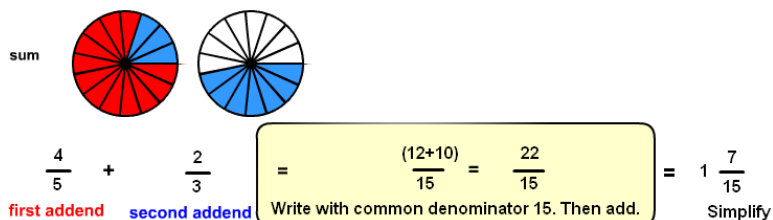
sum

$$\frac{2}{9} + \frac{8}{9} = \frac{(2+8)}{9} = \frac{10}{9} = 1 \frac{1}{9}$$

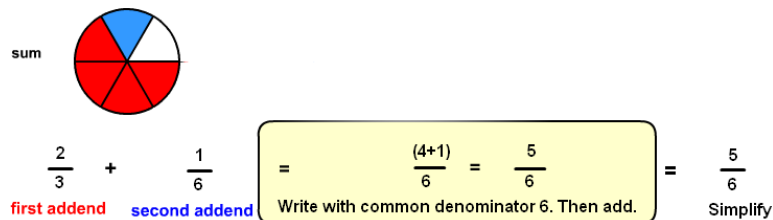
first addend second addend Add numerators. Simplify

5. Add Fractions 3 with Circles

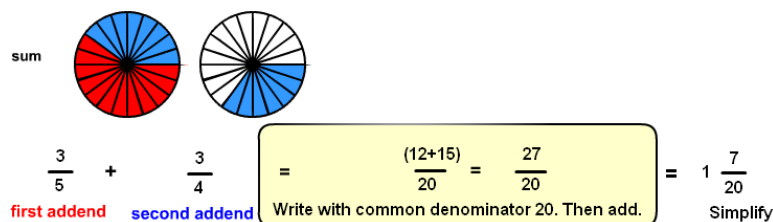
1.



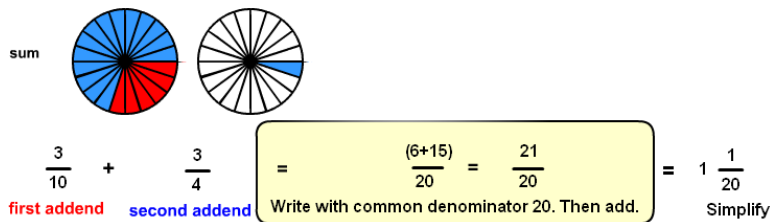
2.



3.

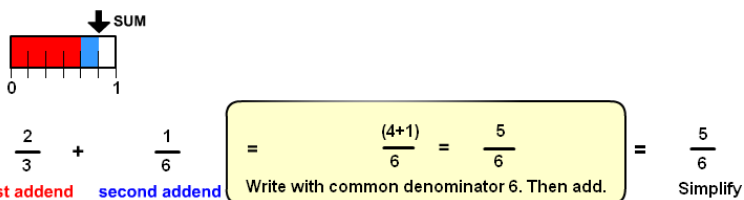


4.

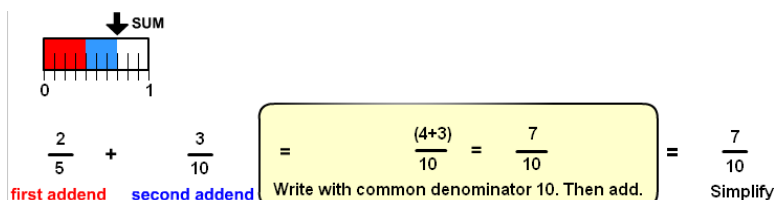


6. Add Fractions 3 with Lines

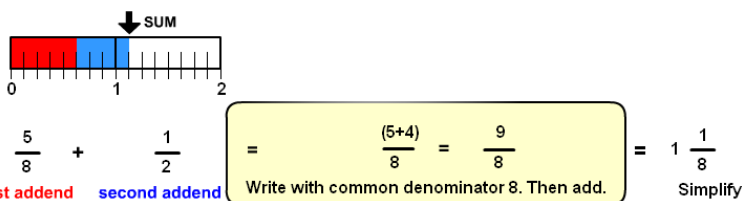
1.



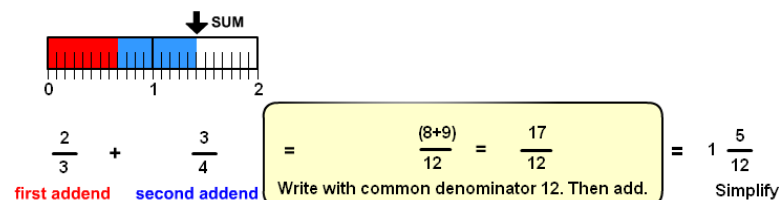
2.



3.

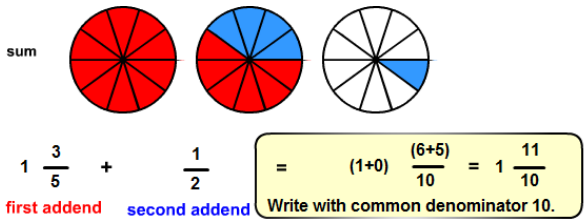


4.



7. Add Fractions 1 with Circles and Lines

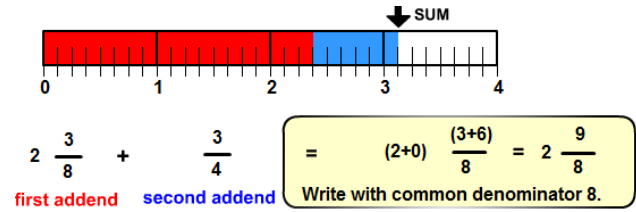
1.



$$= 2 \frac{1}{10}$$

Simplify

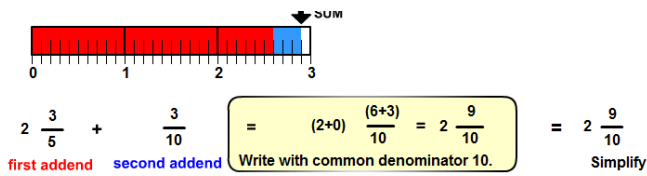
2.



$$= 3 \frac{1}{8}$$

Simplify

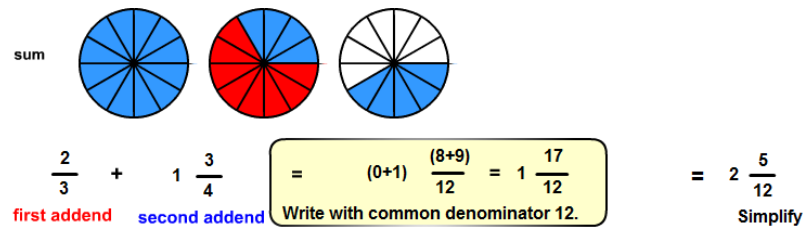
3.



$$= 2 \frac{9}{10}$$

Simplify

4.

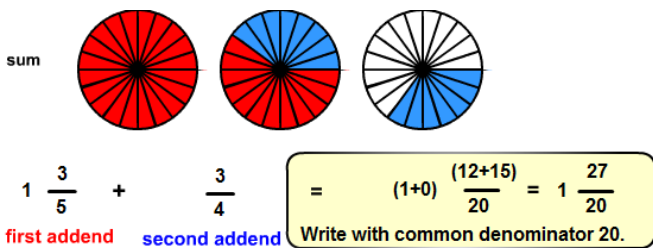


$$= 2 \frac{5}{12}$$

Simplify

8. Add Fractions 2 with Circles and Lines

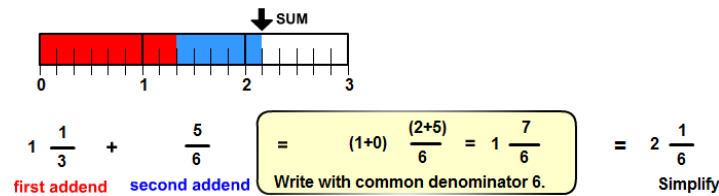
1.



$$= 2 \frac{7}{20}$$

Simplify

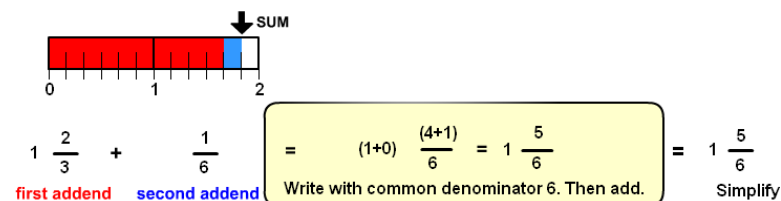
2.



$$= 2 \frac{1}{6}$$

Simplify

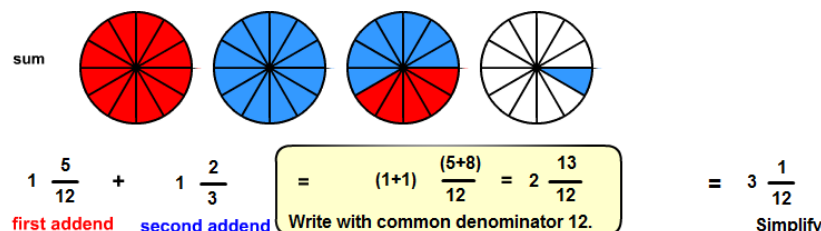
3.



$$= 1 \frac{5}{6}$$

Simplify

4.



$$= 3 \frac{1}{12}$$

Simplify

9. Add Practice

$$1. \quad 2 \frac{1}{5} + 3 \frac{2}{5} = 5 \frac{3}{5}$$

$$2. \quad 2 \frac{1}{5} + 1 \frac{1}{5} = 3 \frac{2}{5}$$

$$3. \quad 2 \frac{1}{5} + 1 \frac{4}{5} = 3 \frac{5}{5} = 4$$

$$4. \quad 2 \frac{3}{4} + 2 \frac{1}{2} = 2 \frac{3}{4} + 2 \frac{2}{4} = 4 \frac{5}{4} = 5 \frac{1}{4}$$

$$5. \quad \frac{2}{3} + 3 \frac{1}{4} = \frac{8}{12} + 3 \frac{3}{12} = 3 \frac{11}{12}$$

$$6. \quad \frac{2}{7} + 2 \frac{1}{4} = \frac{8}{28} + 2 \frac{7}{28} = 2 \frac{15}{28}$$

$$7. \quad \frac{2}{7} + 2 \frac{3}{4} = \frac{8}{28} + 2 \frac{21}{28} = 2 \frac{29}{28} = 3 \frac{1}{28}$$

$$8. \quad \frac{2}{7} + 2 \frac{3}{5} = \frac{10}{35} + 2 \frac{21}{35} = 2 \frac{31}{35}$$

$$9. \quad \frac{5}{7} + 2 \frac{3}{5} = \frac{25}{35} + 2 \frac{21}{35} = 2 \frac{46}{35} = 3 \frac{11}{35}$$

$$10. \quad \frac{5}{6} + 2 \frac{3}{10} = \frac{25}{30} + 2 \frac{9}{30} = 2 \frac{34}{30} = 3 \frac{4}{30} = 3 \frac{2}{15}$$